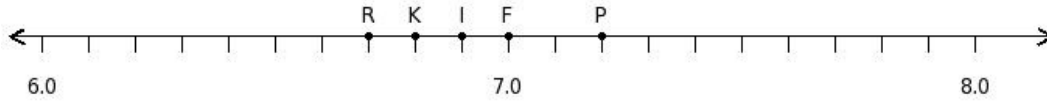





1. Find the position of the decimal number 6.9 on the number line




- (i) F (ii) K (iii) R (iv) P (v) I

2. Find the decimal number at the point labelled with letter X




- (i) 8.6 (ii) 8.2 (iii) 8.9 (iv) 9.1 (v) 8.5

3. Find the sum of the decimal numbers at the points labelled with letters A and B




- (i) 13.6 (ii) 13.3 (iii) 13.1 (iv) 12.9 (v) 13.7

4. Find the difference of the decimal numbers at the points labelled with letters P and Q



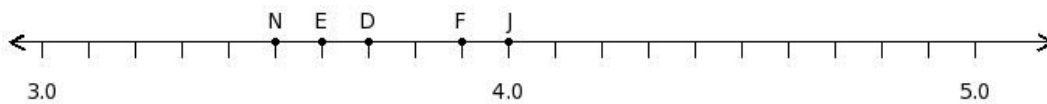
- (i) 0.8 (ii) -0 (iii) 0.3 (iv) 0.2

5. Find the product of the decimal numbers at the points labelled with letters G and H




- (i) 42.78 (ii) 42.88 (iii) 42.98 (iv) 43.28

6. Find the position of the decimal number 3.7 on the number line




- (i) D (ii) E (iii) F (iv) J (v) N

7. Find the decimal number at the point labelled with letter D



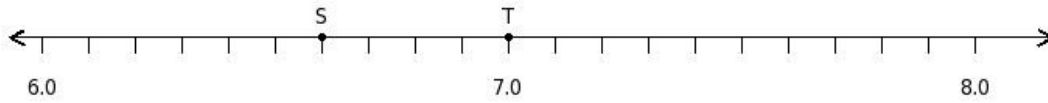
- (i) 6.3 (ii) 6.1 (iii) 5.5 (iv) 6.4 (v) 5.8

8. Find the sum of the decimal numbers at the points labelled with letters F and G




- (i) 13.9 (ii) 14.1 (iii) 13.5 (iv) 13.3 (v) 13.6

9. Find the difference of the decimal numbers at the points labelled with letters S and T




- (i) 0.6 (ii) 0.9 (iii) 0.2 (iv) 0.4 (v) 0.8

10. Find the product of the decimal numbers at the points labelled with letters F and G




- (i) 20.84 (ii) 20.24 (iii) 20.54 (iv) 19.94

11. Find the position of the decimal number 2.5 on the number line



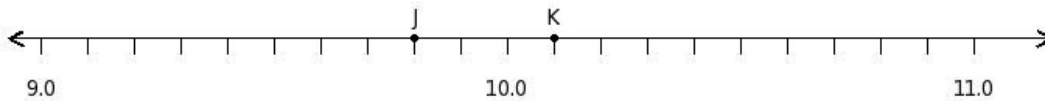
- (i) K (ii) J (iii) N (iv) O (v) R

12. Find the decimal number at the point labelled with letter E




- (i) 5.5 (ii) 5.3 (iii) 5.9 (iv) 5.7 (v) 6.1

13. Find the sum of the decimal numbers at the points labelled with letters J and K




- (i) 19.7 (ii) 20.4 (iii) 19.9 (iv) 20.2

14. Find the difference of the decimal numbers at the points labelled with letters M and N



- (i) 0.7 (ii) 0.3 (iii) 0.6 (iv) 0.1 (v) 0.2

15. Find the product of the decimal numbers at the points labelled with letters R and S



- (i) 8.04 (ii) 7.24 (iii) 7.54 (iv) 7.94 (v) 7.64

Assignment Key

1) (v)	2) (v)	3) (iii)	4) (iv)	5) (ii)	6) (i)
7) (v)	8) (iii)	9) (iv)	10) (ii)	11) (iv)	12) (i)
13) (iii)	14) (v)	15) (iii)			