



Find the table of points that satisfy

1. the parabola equation $y = 2x^2$

(i)

x	-2	-1	0	0	2
y	8	2	0	3	8

(ii)

x	-2	-1	0	1	2
y	8	2	0	2	8

(iii)

x	-2	-1	1	1	2
y	8	2	-1	2	8

(iv)

x	-2	-1	0	1	4
y	8	2	0	2	10

(v)

x	-2	-1	-2	1	2
y	8	2	-2	2	8

Find the table of points that satisfy

2. the parabola equation $y = -3x^2$

(i)

x	-2	-1	0	1	4
y	-12	-3	0	-3	-10

(ii)

x	-2	-1	0	1	2
y	-12	-3	0	-3	-12

(iii)

x	-2	-1	-2	1	2
y	-12	-3	-2	-3	-12

(iv)

x	-2	-1	1	1	2
y	-12	-3	-1	-3	-12

(v)

x	-2	-1	0	0	2
y	-12	-3	0	-2	-12

Find the table of points that satisfy

3. the parabola equation $y = (4x^2 + 6x + 2)$

(i)

x	-2	-1	0	0	2
y	6	0	2	13	30

(ii)

x	-2	-1	1	1	2
y	6	0	1	12	30

(iii)

x	-2	-1	0	1	4
y	6	0	2	12	32

(iv)

x	-2	-1	0	1	2
y	6	0	2	12	30

(v)

x	-2	-1	-2	1	2
y	6	0	0	12	30

Find the table of points that satisfy

4. the parabola equation $y = (-3x^2 - 7x - 2)$

(i)

x	-2	-1	-2	1	2
y	0	2	-4	-12	-28

(ii)

x	-2	-1	0	0	2
y	0	2	-2	-11	-28

(iii)

x	-2	-1	0	1	2
y	0	2	-2	-12	-28

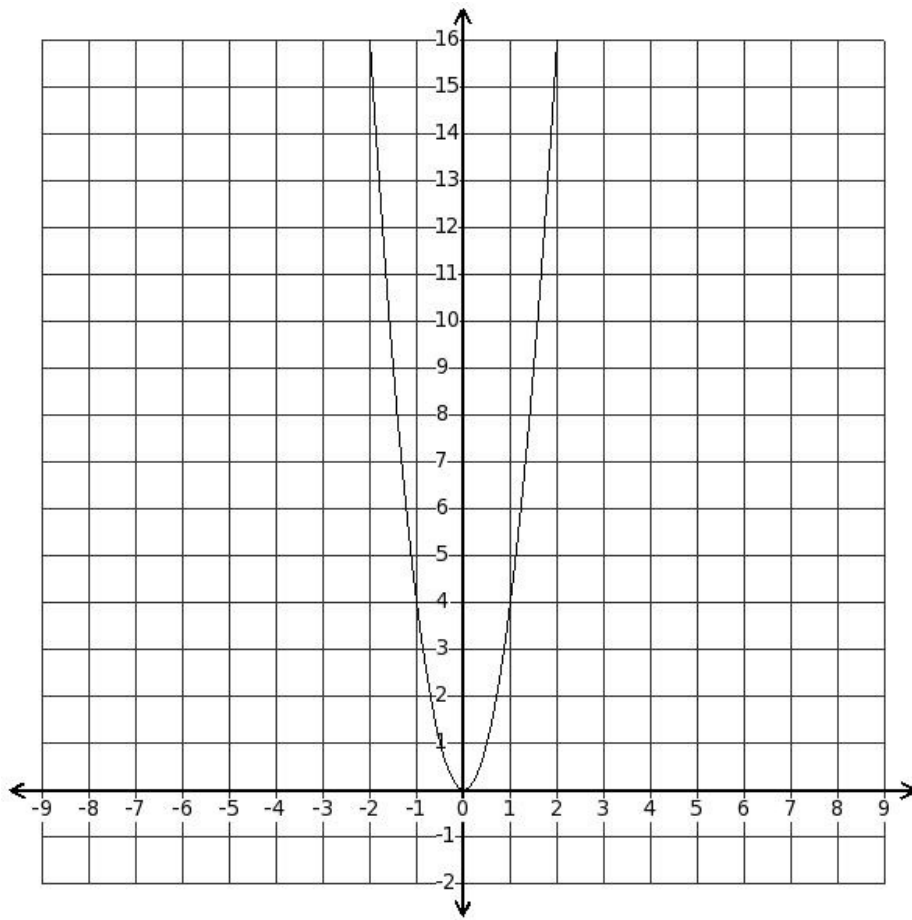
(iv)

x	-2	-1	0	1	4
y	0	2	-2	-12	-26

(v)

x	-2	-1	1	1	2
y	0	2	-3	-12	-28

5. Find the table of points that satisfy the parabola equation $y = 4x^2$



(i)

x	-2	-1	-2	1	2
y	16	4	-2	4	16

(ii)

x	-2	-1	0	1	4
y	16	4	0	4	18

(iii)

x	-2	-1	0	0	2
y	16	4	0	5	16

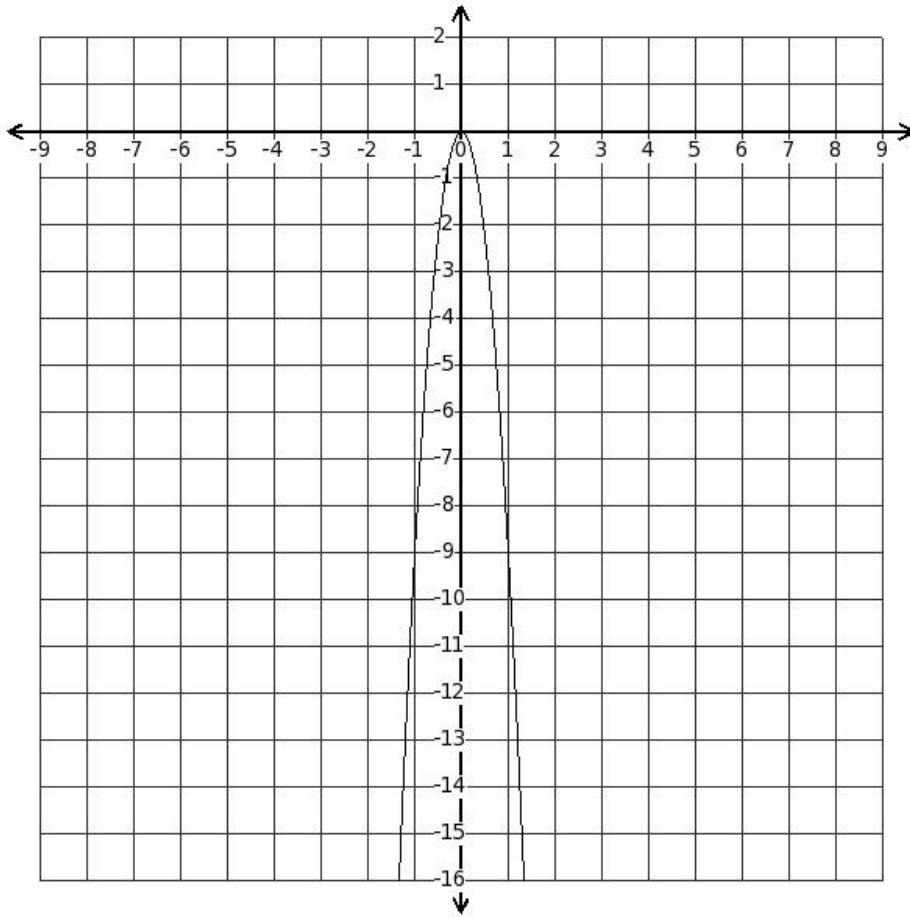
(iv)

x	-2	-1	1	1	2
y	16	4	-1	4	16

(v)

x	-2	-1	0	1	2
y	16	4	0	4	16

6. Find the table of points that satisfy the parabola equation $y = (-9x^2)$



(i)

x	-2	-1	0	1	2
y	-36	-9	0	-9	-36

(ii)

x	-2	-1	1	1	2
y	-36	-9	-1	-9	-36

(iii)

x	-2	-1	0	1	4
y	-36	-9	0	-9	-34

(iv)

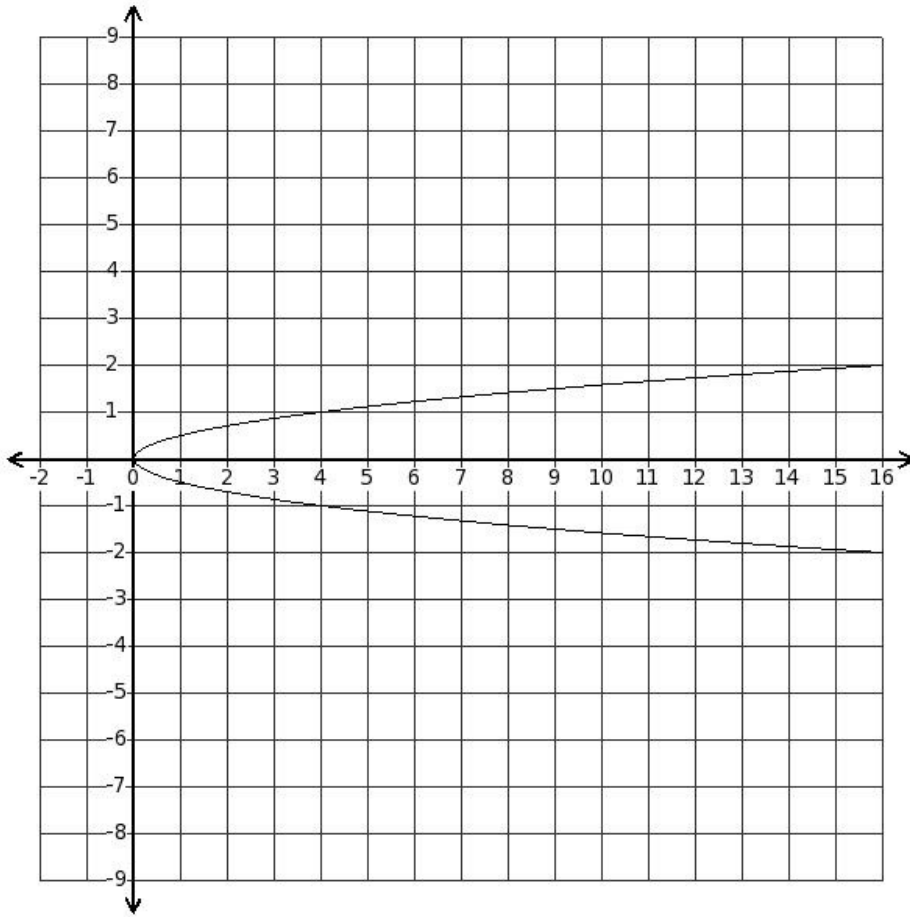
x	-2	-1	-2	1	2
y	-36	-9	-2	-9	-36

(v)

x	-2	-1	0	0	2
y	-36	-9	0	-8	-36

Find the table of points that satisfy

7. the parabola equation $x = 4y^2$



(i)

x	16	4	1	4	16
y	-2	-1	-1	1	2

(ii)

x	16	4	0	3	16
y	-2	-1	0	2	2

(iii)

x	16	4	0	4	18
y	-2	-1	0	1	4

(iv)

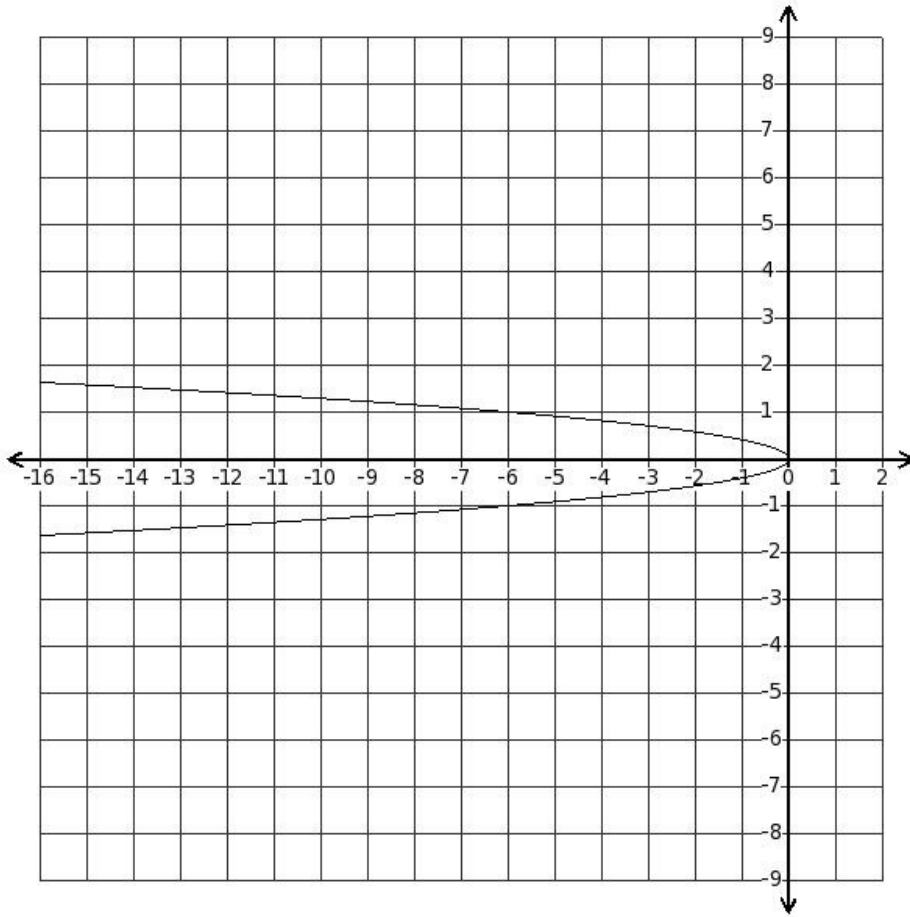
x	16	4	0	4	16
y	-2	-1	0	1	2

(v)

x	16	4	-2	4	16
y	-2	-1	-2	1	2

Find the table of points that satisfy

8. the parabola equation $x = (-6y^2)$



(i)

x	-24	-6	0	-6	-22
y	-2	-1	0	1	4

(ii)

x	-24	-6	-2	-6	-24
y	-2	-1	-2	1	2

(iii)

x	-24	-6	0	-6	-24
y	-2	-1	0	1	2

(iv)

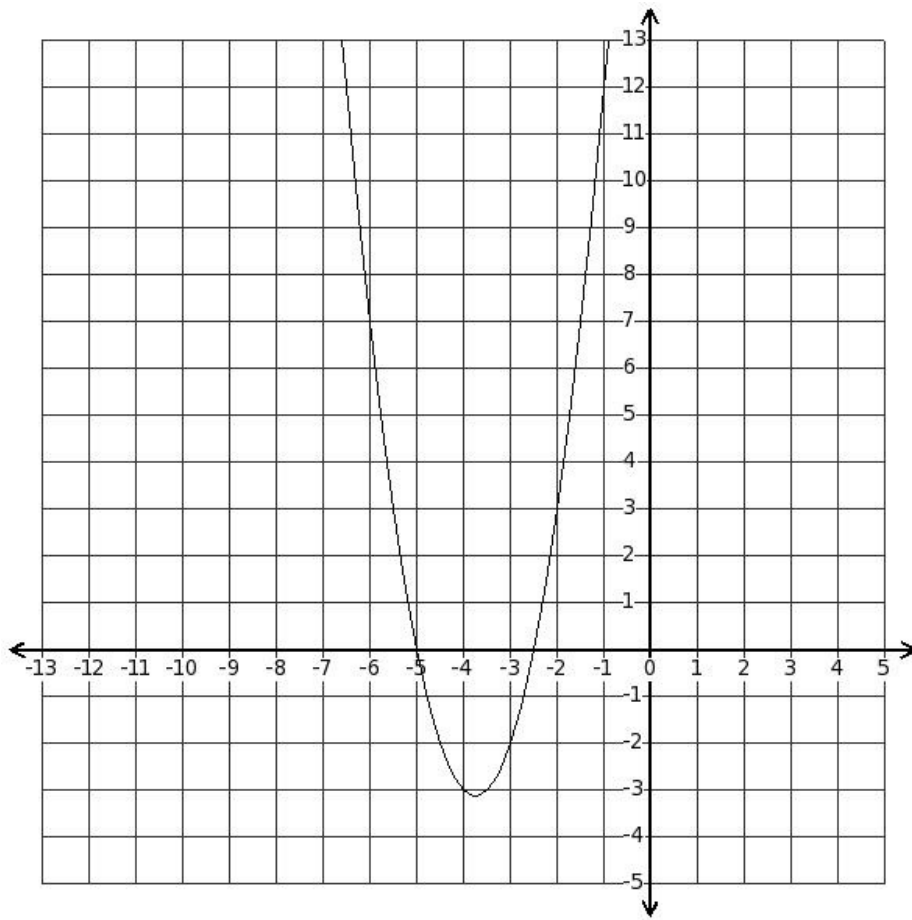
x	-24	-6	0	-7	-24
y	-2	-1	0	2	2

(v)

x	-24	-6	1	-6	-24
y	-2	-1	-1	1	2

Find the table of points that satisfy

9. the parabola equation $y = (2x^2 + 15x + 25)$



(i)

x	-2	-1	0	1	2
y	3	12	25	42	63

(ii)

x	-2	-1	0	0	2
y	3	12	25	43	63

(iii)

x	-2	-1	-2	1	2
y	3	12	23	42	63

(iv)

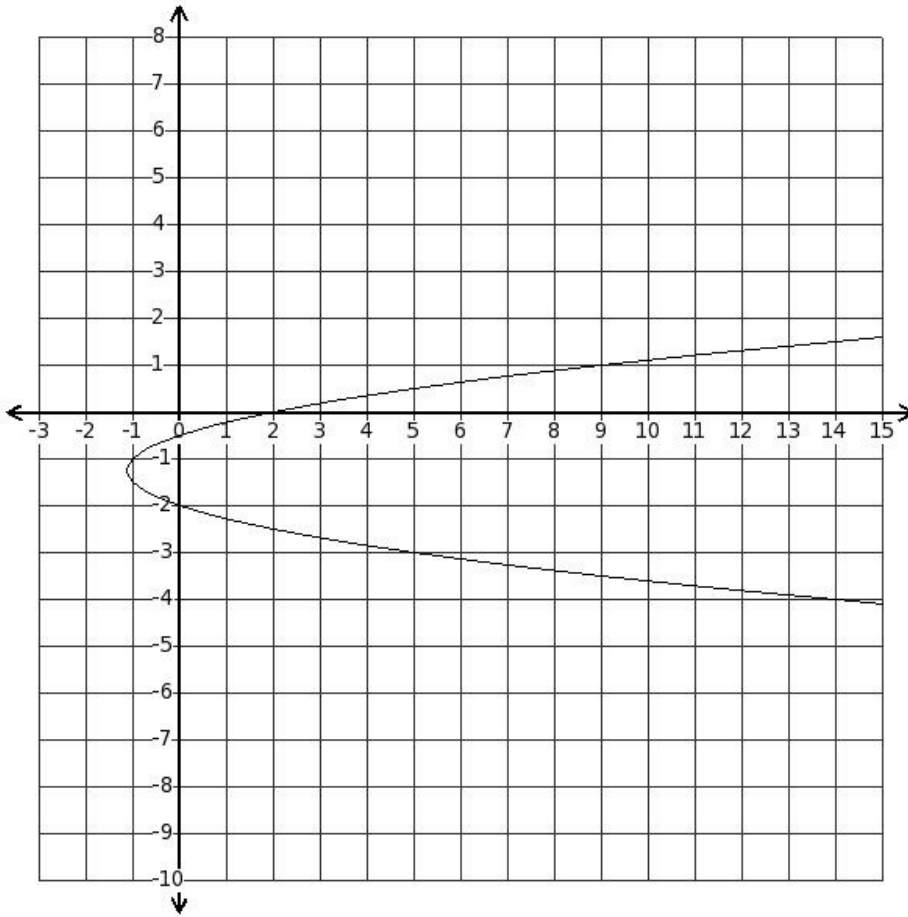
x	-2	-1	0	1	4
y	3	12	25	42	65

(v)

x	-2	-1	1	1	2
y	3	12	24	42	63

Find the table of points that satisfy

10. the parabola equation $x = (2y^2 + 5y + 2)$



(i)

x	0	-1	9	20
y	-2	-1	1	2

(ii)

x	0	-1	2	9	22
y	-2	-1	0	1	4

(iii)

x	0	-1	2	9	20
y	-2	-1	0	1	2

(iv)

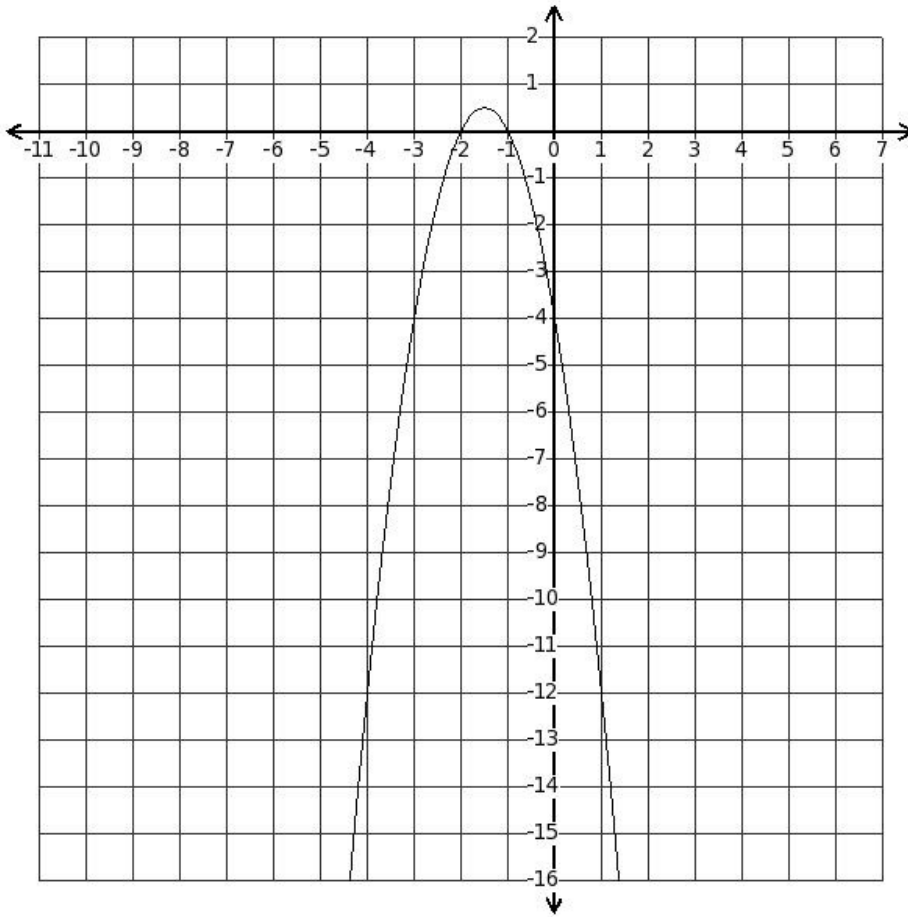
x	0	-1	3	9	20
y	-2	-1	-1	1	2

(v)

x	0	-1	2	8	20
y	-2	-1	0	2	2

Find the table of points that satisfy

11. the parabola equation $y = (-2x^2 - 6x - 4)$



(i)

x	-2	-1	0	0	2
y	0	0	-4	-11	-24

(ii)

x	-2	-1	1	1	2
y	0	0	-5	-12	-24

(iii)

x	-2	-1	0	1	2
y	0	0	-4	-12	-24

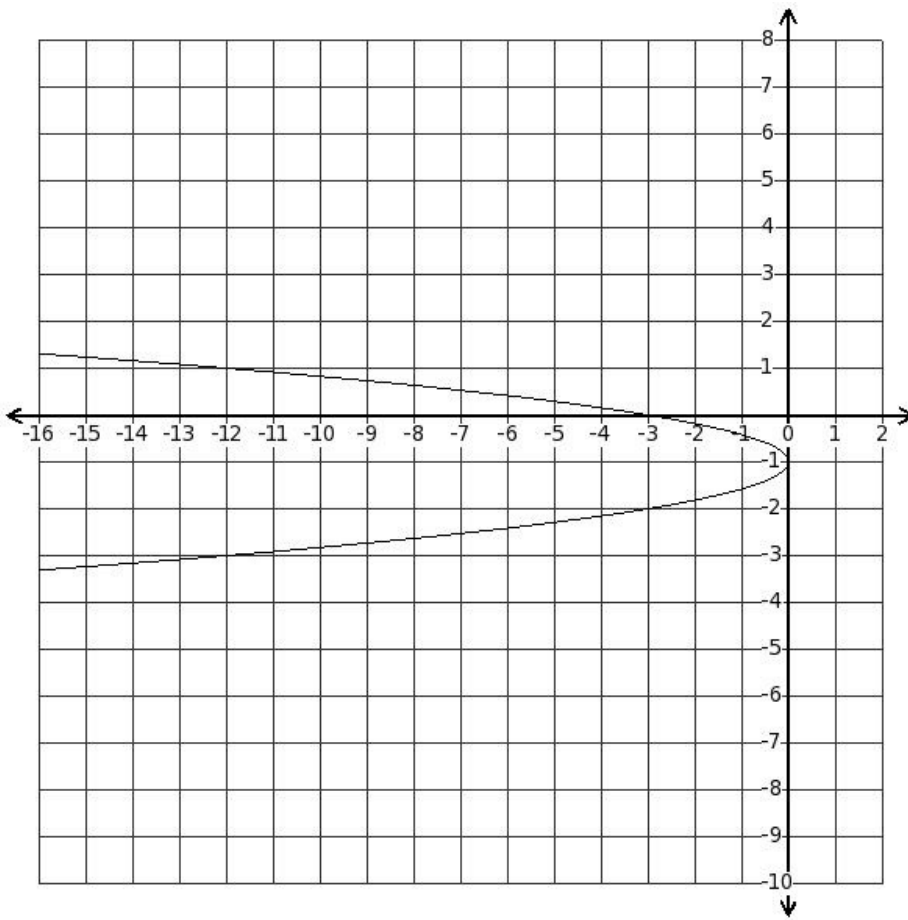
(iv)

x	-2	-1	0	1	4
y	0	0	-4	-12	-22

(v)

x	-2	-1	-2	1	2
y	0	0	-6	-12	-24

12. Find the table of points that satisfy the parabola equation $x = (-3y^2 - 6y - 3)$



(i)

x	-3	0	-2	-12	-27
y	-2	-1	-1	1	2

(ii)

x	-3	0	-3	-12	-27
y	-2	-1	0	1	2

(iii)

x	-3	0	-3	-13	-27
y	-2	-1	0	2	2

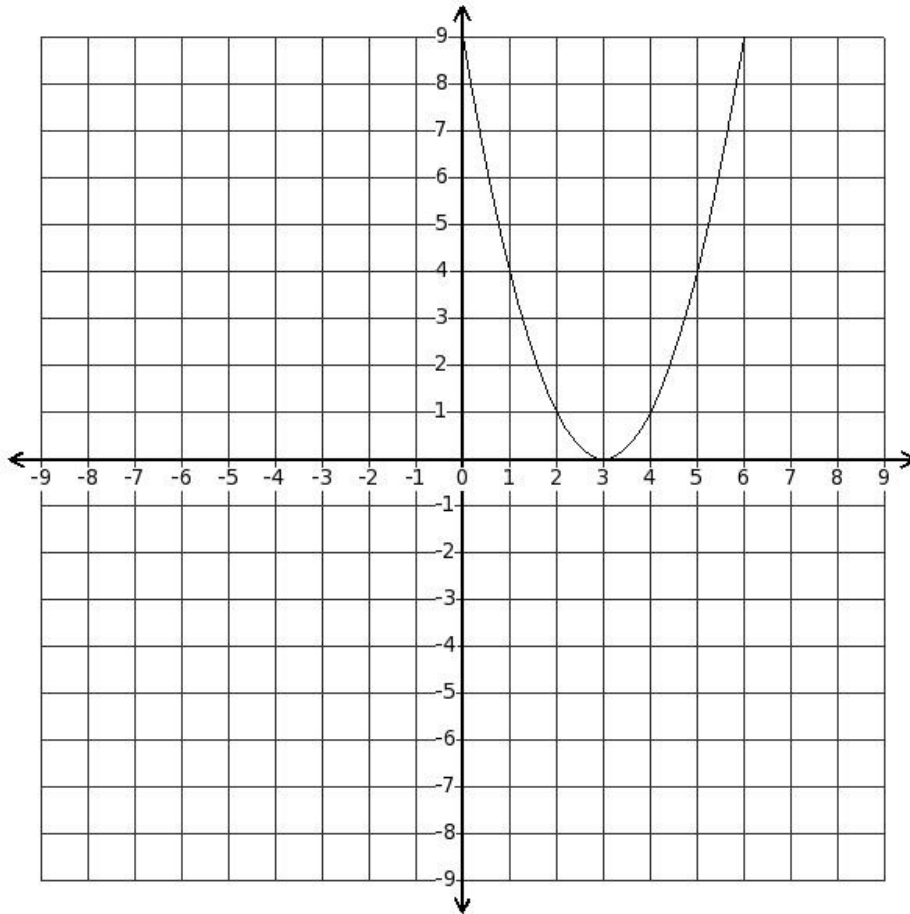
(iv)

x	-3	0	-3	-12	-25
y	-2	-1	0	1	4

(v)

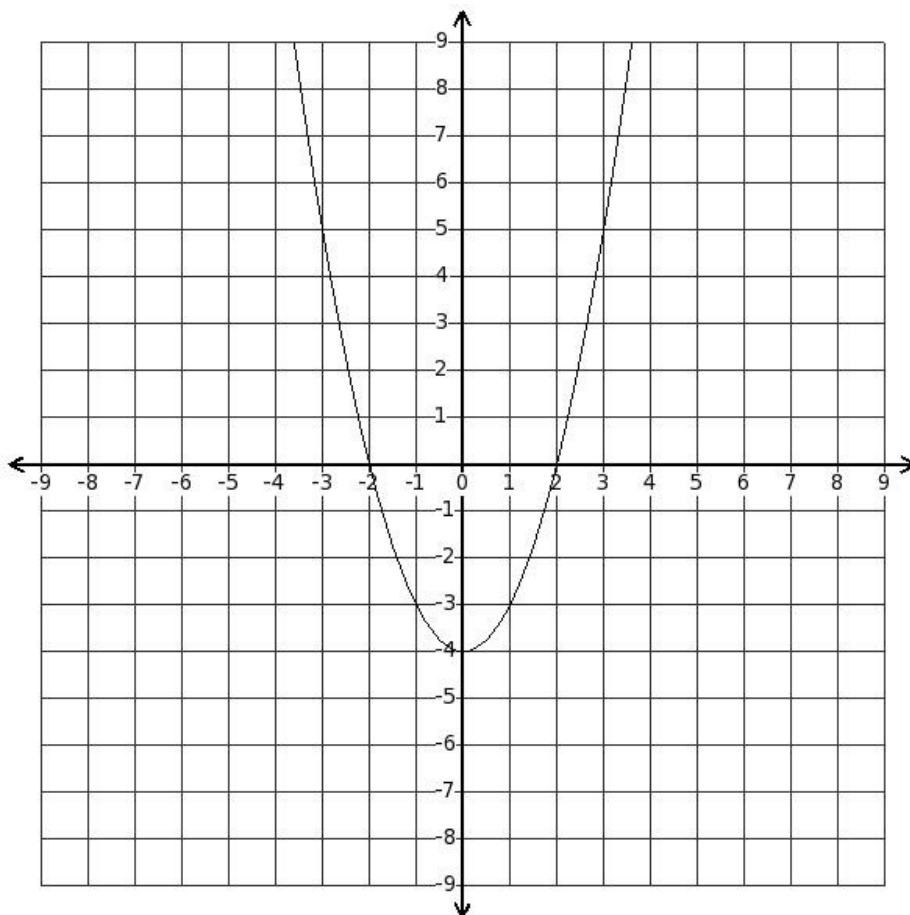
x	-3	0	-5	-12	-27
y	-2	-1	-2	1	2

13. Find the roots of the quadratic equation $(x^2 - 6x + 9) = 0$



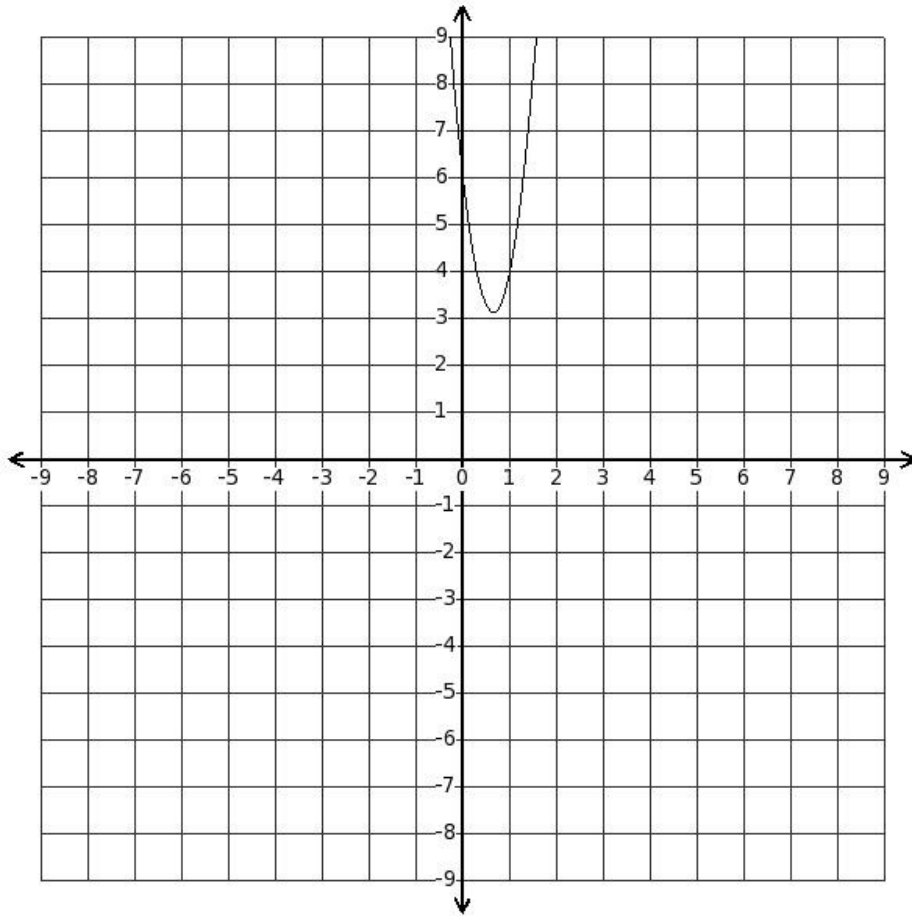
- (i) no real roots (ii) (6,3) (iii) (4,4) (iv) (4,3) (v) (3,3)

14. Find the roots of the quadratic equation $(x^2 - 4) = 0$



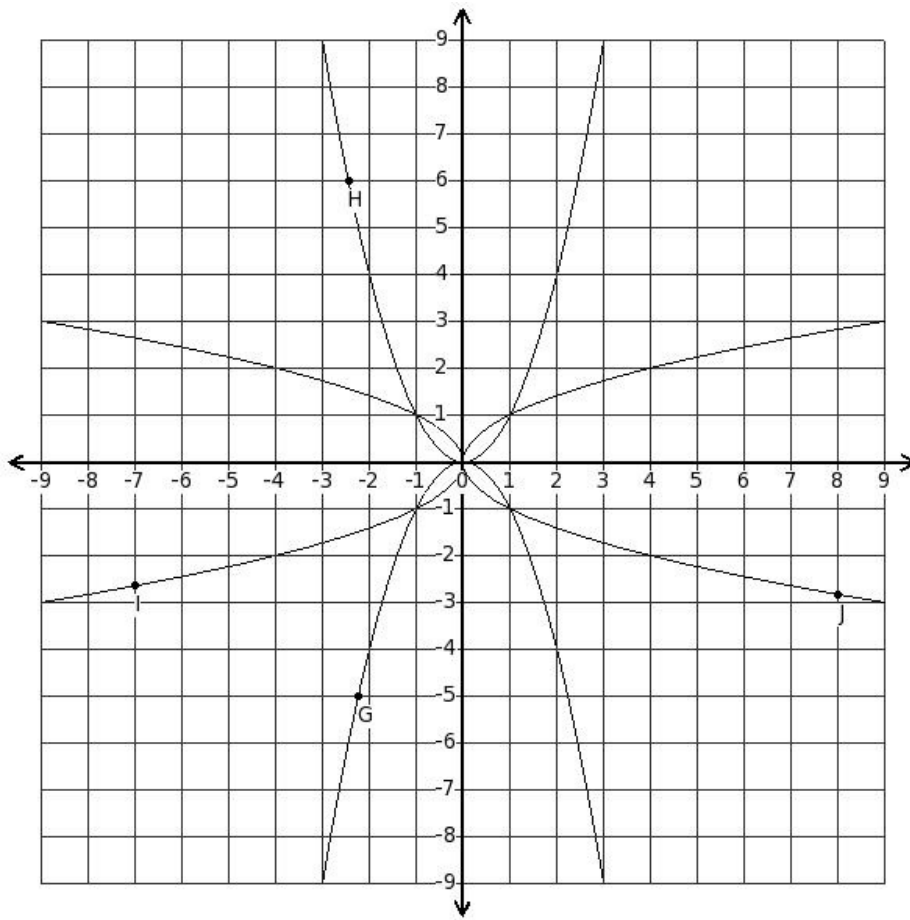
- (i) (-1,3) (ii) (-1,2) (iii) no real roots (iv) (2,2) (v) (-2,2)

15. Find the roots of the quadratic equation $(7x^2 - 9x + 6) = 0$



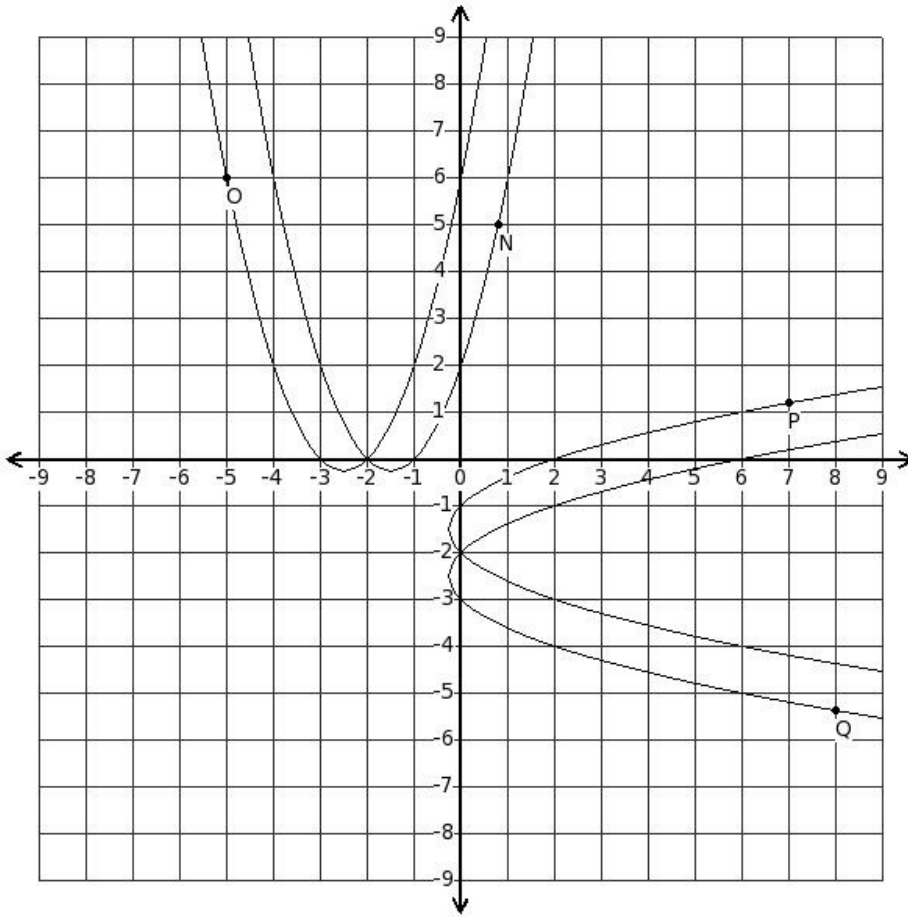
- (i) (1,0) (ii) no real roots (iii) (3,0) (iv) (1,1)

16. Which of the displayed parabolae represent the equation $y = x^2$



- (i) parabola with point G (ii) parabola with point H (iii) parabola with point J (iv) parabola with point I

17. Which of the displayed parabolae represent the equation $x = (y^2 + 5y + 6)$



- (i) parabola with point O (ii) parabola with point P (iii) parabola with point Q (iv) parabola with point N

The given table of points satisfy which parabola equation?

18.

x	-3	-2	-1	0	1	2	3
y	18	8	2	0	2	8	18

- (i) $y = 2x^2$ (ii) $y = 4x^2$ (iii) $y = (-x^2)$ (iv) $y = x^2$ (v) $y = 3x^2$

The given table of points satisfy which parabola equation?

19.

x	18	8	2	0	2	8	18
y	-3	-2	-1	0	1	2	3

- (i) $x = (-y^2)$ (ii) $x = y^2$ (iii) $x = 3y^2$ (iv) $x = 2y^2$ (v) $x = 5y^2$

The given table of points satisfy which parabola equation?

20.

x	-3	-2	-1	0	1	2	3
y	-27	-12	-3	0	-3	-12	-27

- (i) $y = (-4x^2)$ (ii) $y = (-2x^2)$ (iii) $y = 0$ (iv) $y = (-6x^2)$ (v) $y = (-3x^2)$

The given table of points satisfy which parabola equation?

21.

x	-3	-2	-1	0	1	2	3
y	15	3	-1	3	15	35	63

- (i) $y = (4x^2 + 8x + 3)$ (ii) $y = (3x^2 + 8x + 3)$ (iii) $y = (4x^2 + 10x + 3)$ (iv) $y = (5x^2 + 8x + 3)$
(v) $y = (4x^2 + 6x + 3)$

The given table of points satisfy which parabola equation?

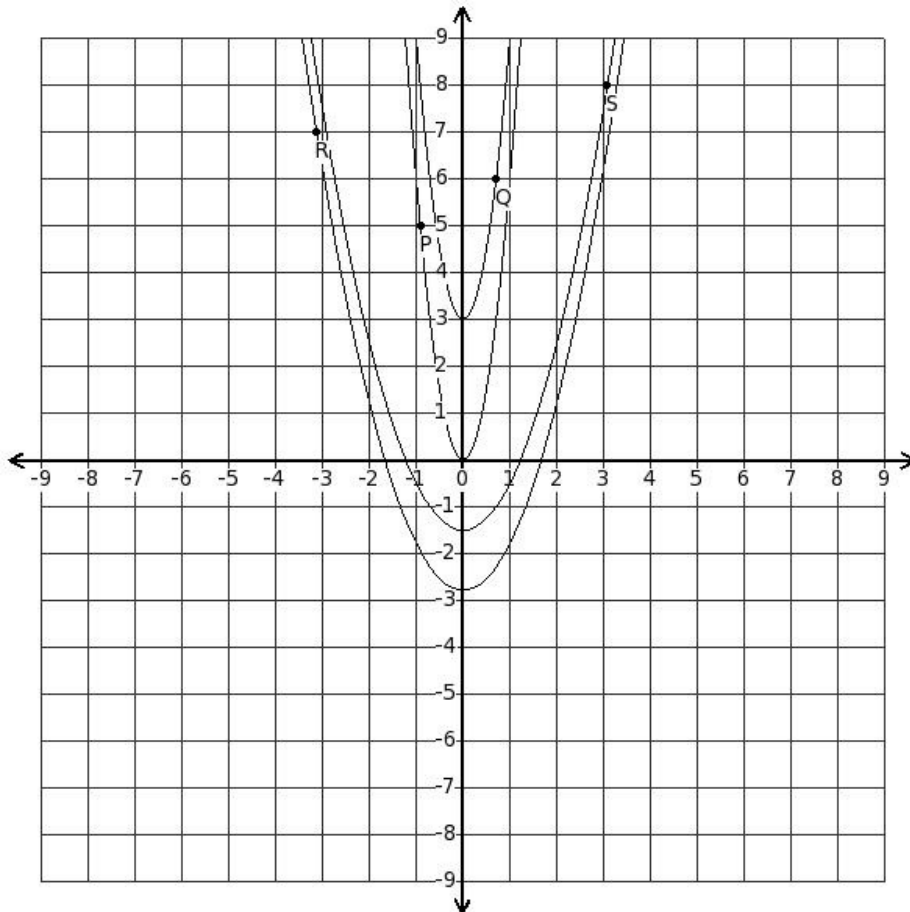
22.

x	-3	-2	-1	0	1	2	3
y	-4	-1	0	-1	-4	-9	-16

- (i) $y = (-x^2 - 4x - 1)$ (ii) $y = (-x^2 - 2x - 1)$ (iii) $y = (-2x - 1)$ (iv) $y = (-2x^2 - 2x - 1)$
 (v) $y = (-x^2 + x - 1)$

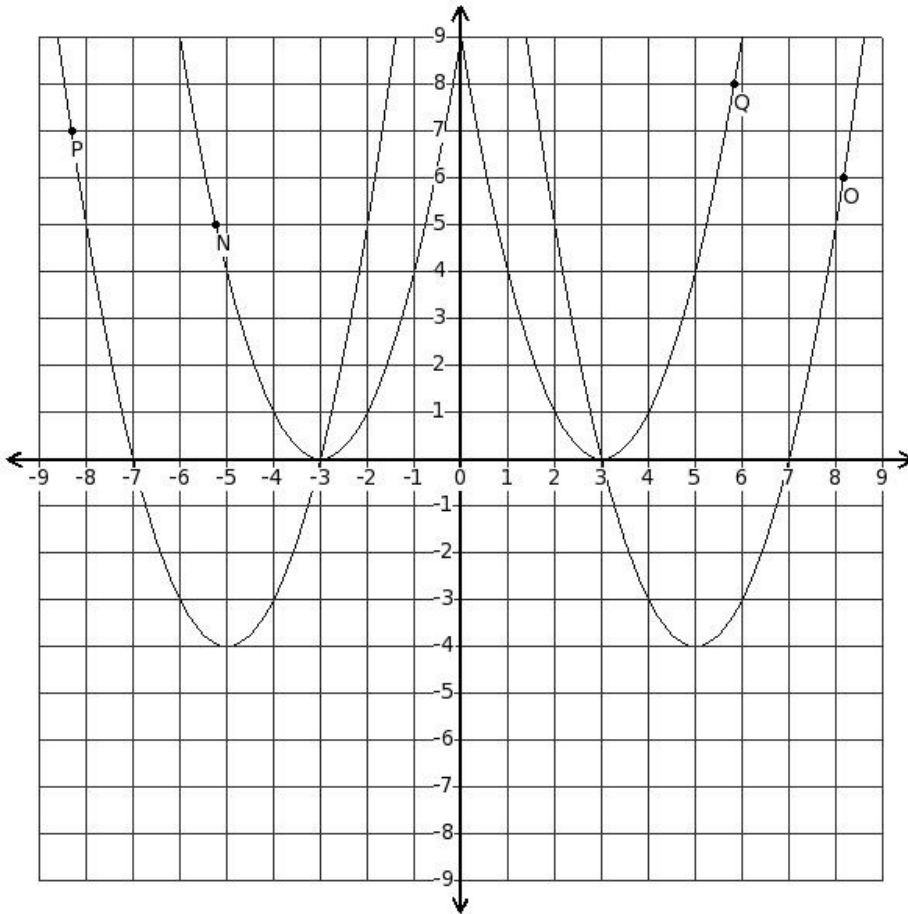
Which of the displayed parabolae represents

23. the equation $y = (6x^2 + 3)$



- (i) parabola with point P (ii) parabola with point R (iii) parabola with point S (iv) parabola with point Q

24. Which of the displayed parabolae represents the equation $y = (x^2 - 10x + 21)$



- (i) parabola with point P (ii) parabola with point N (iii) parabola with point Q (iv) parabola with point O

25. Which of the following are true?

- The curve of a parabola is a straight line
- The curve of a parabola is a curve
- The curve of a parabola is a circle
- The curve of a parabola is a closed figure
- The curve of a parabola lie in only one quadrant
- The curve of a parabola $y = ax^2 + bx + c$ always crosses the X-axis

- (i) {f,b} (ii) {c,b} (iii) {a,b} (iv) {d,e,b} (v) {b}

26. Which of the following are true for $m > 0$ and $a > 0$?

- The curve of a parabola $x = -my^2$ lies in the II & III quadrant
- The curve of a parabola $y = mx^2$ lies in the I & II quadrant
- The curve of a parabola $y = -mx^2$ lies in the I & II quadrant
- The curve of a parabola $y = ax^2 + bx + c$ lies in the I & II quadrant
- The curve of a parabola $x = -my^2$ lies in the I & II quadrant

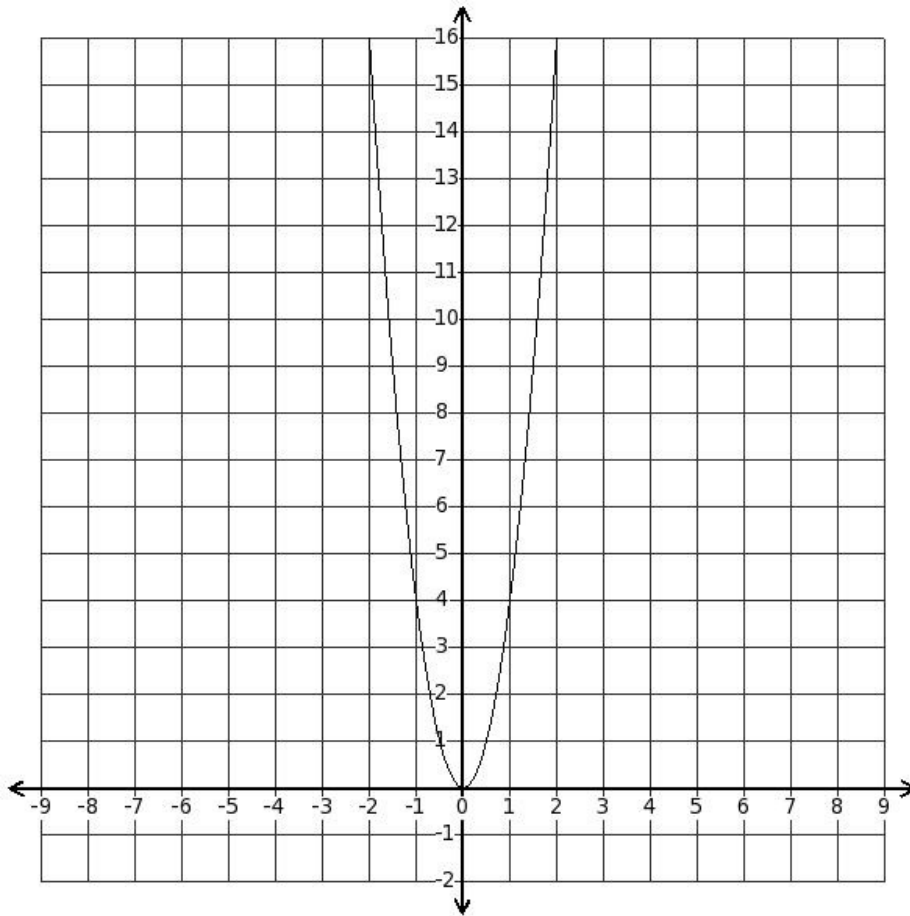
- (i) {c,a} (ii) {d,b,a} (iii) {e,c,a} (iv) {d,b} (v) {a,b}

27. Which of the following are true for the parabola $y = ax^2 + bx + c$?

- a) If the curve meets the X-axis at two places, there are two distinct non-real roots.
- b) If the curve meets the X-axis at only one point, $b^2 - 4ac > 0$
- c) If the curve meets the X-axis at only one point, $b^2 - 4ac = 0$
- d) If the curve does not meet the X-axis, there are no real roots for $y = ax^2 + bx + c$
- e) If the curve does not meet the X-axis, $b^2 - 4ac < 0$

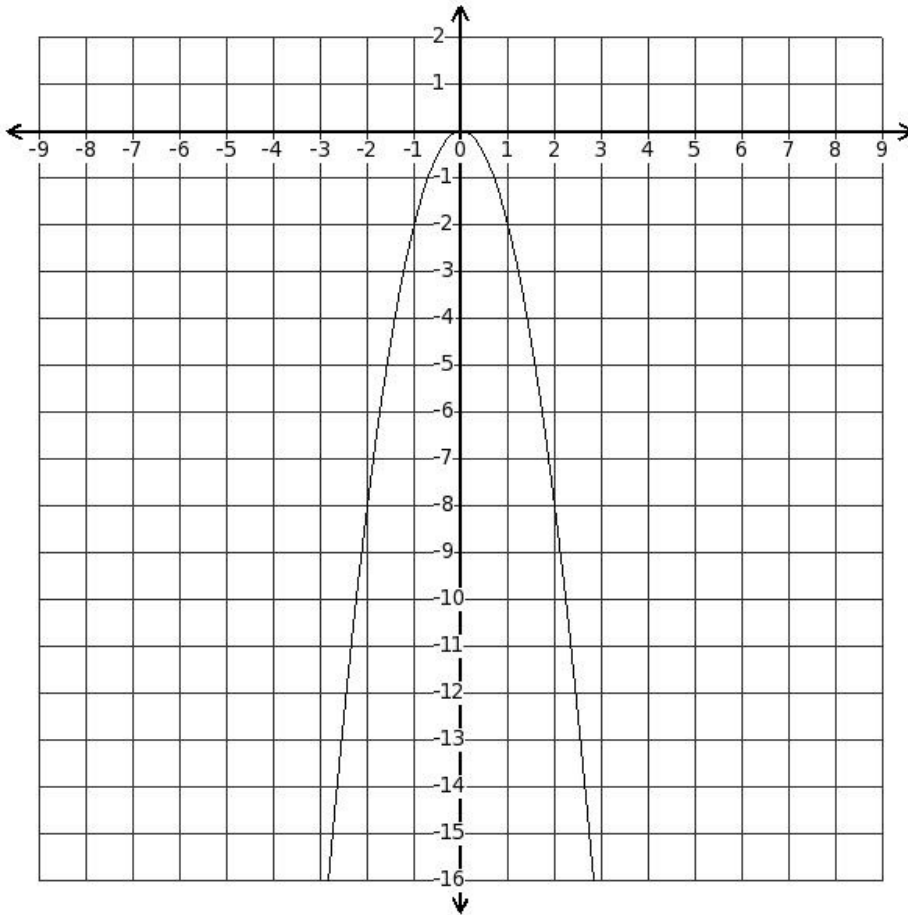
(i) {a,c} (ii) {a,b,e} (iii) {c,d,e} (iv) {a,c,d} (v) {b,d}

28. From the graph, find the approximate values of 'x' for which $y = 4$



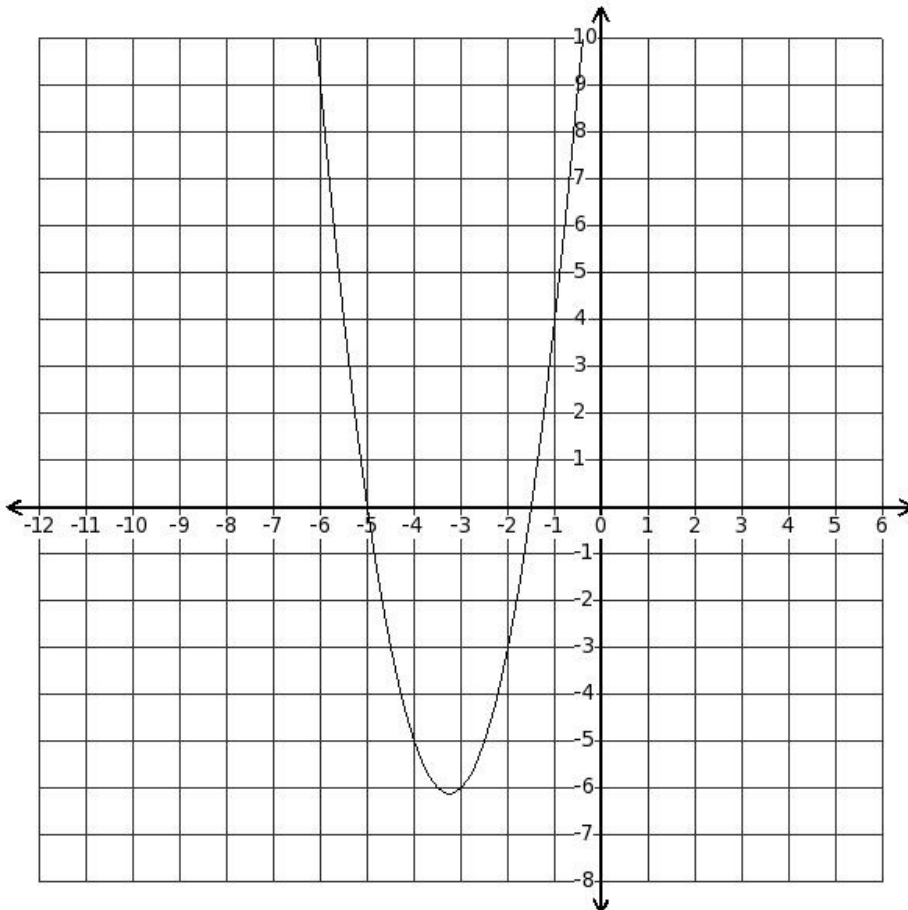
(i) 1.00, -1.00 (ii) 1.50, -1.50 (iii) 0.00, 0.00 (iv) 2.00, -2.00 (v) 0.50, -0.50

29. From the graph, find the approximate values of 'x' for which $y = -3$



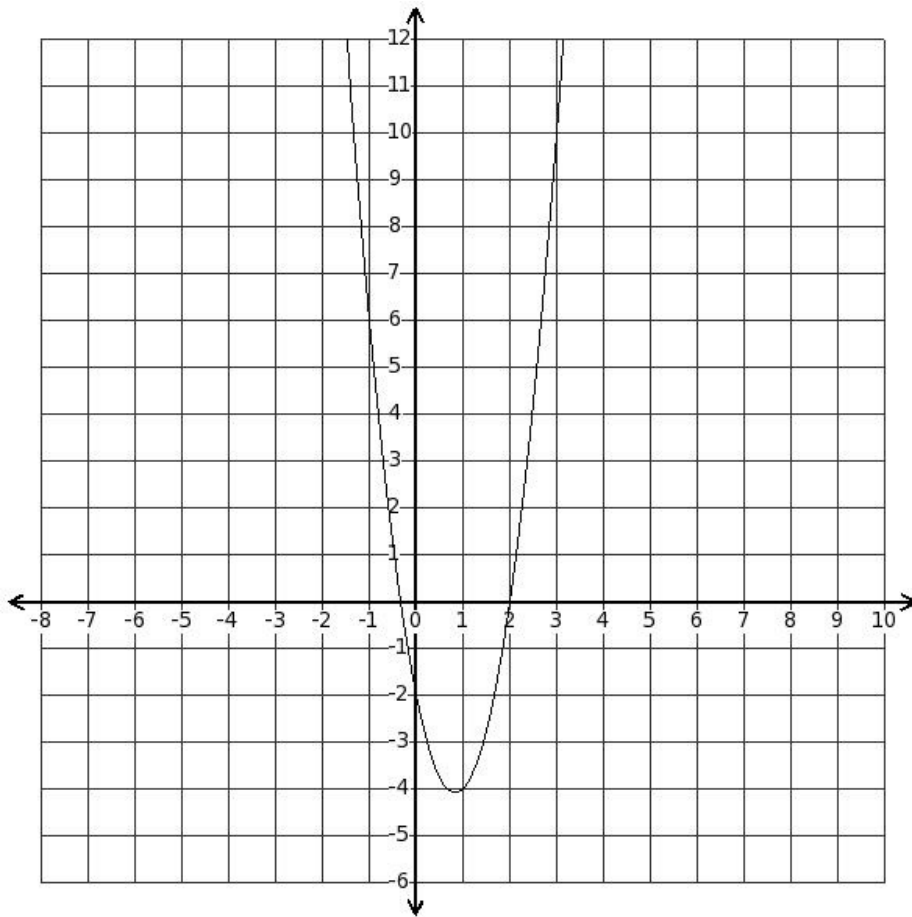
- (i) -1.22, 1.22 (ii) -0.72, 0.72 (iii) -2.22, 2.22 (iv) -0.22, 0.22 (v) -1.72, 1.72

30. From the graph, find the approximate values of 'x' for which $y = 9$



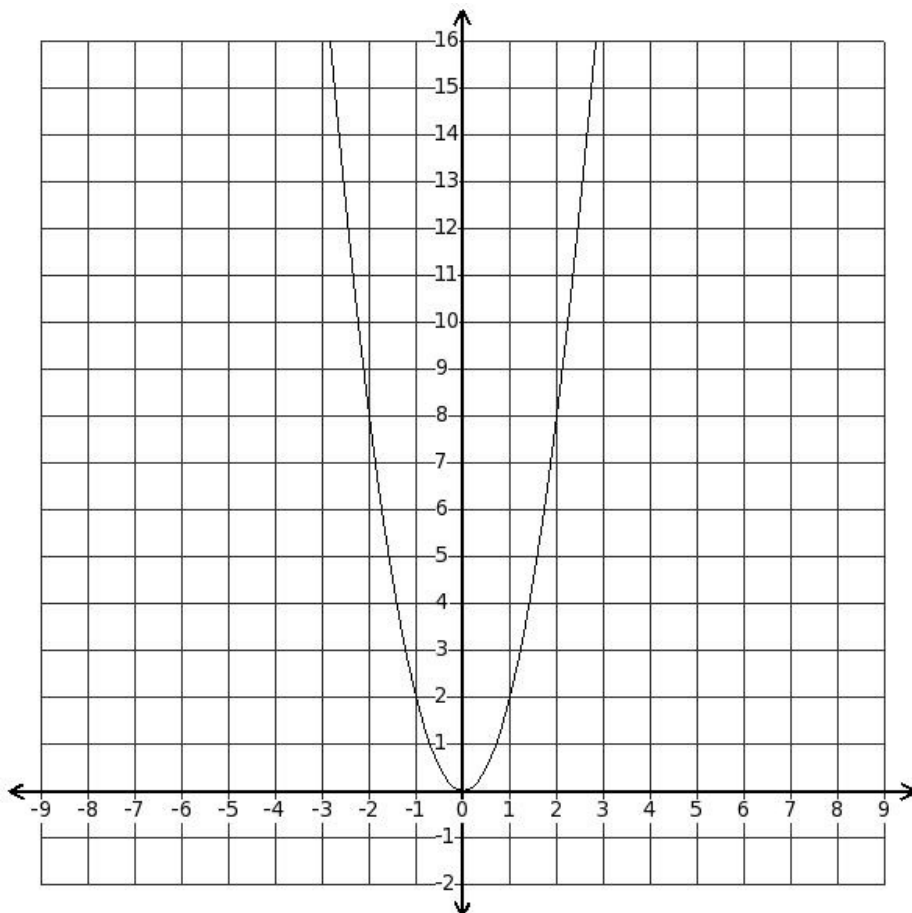
- (i) -1.00, -5.50 (ii) -0.50, -6.00 (iii) 0.00, -6.50 (iv) -1.50, -5.00 (v) 0.50, -7.00

31. From the graph, find the approximate values of 'x' for which $y=7$



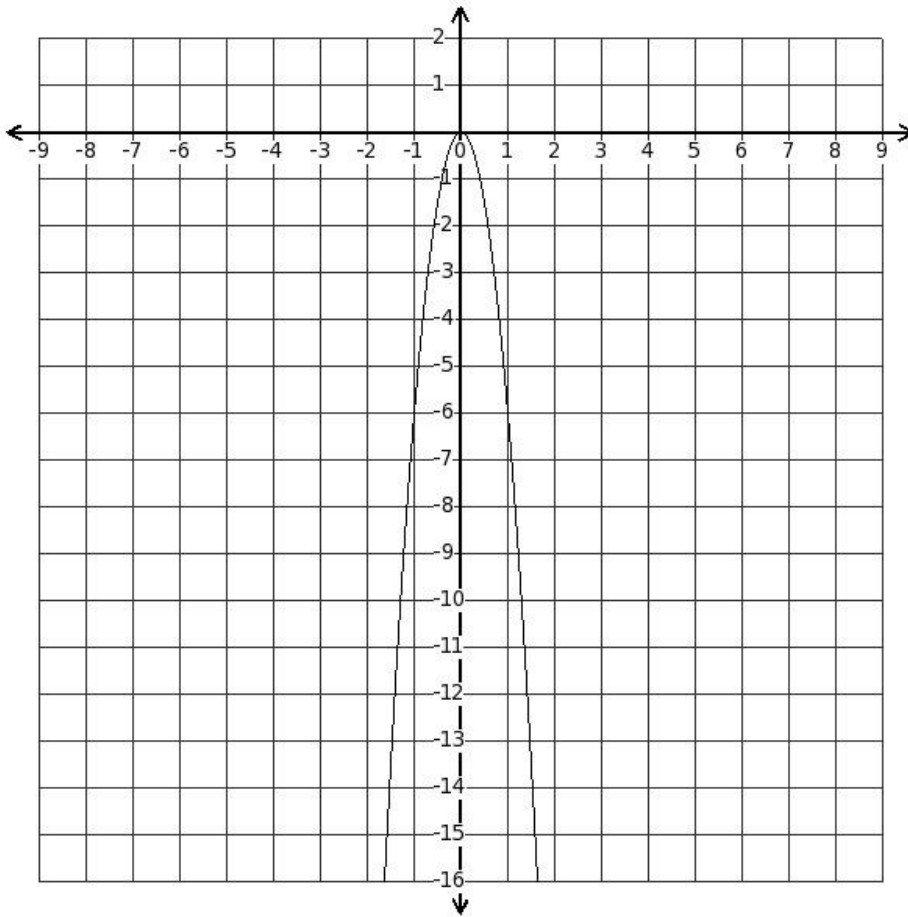
- (i) 2.26, -0.59 (ii) 1.76, -0.09 (iii) 3.76, -2.09 (iv) 3.26, -1.59 (v) 2.76, -1.09

32. Which of the following equations represents the given graph ?



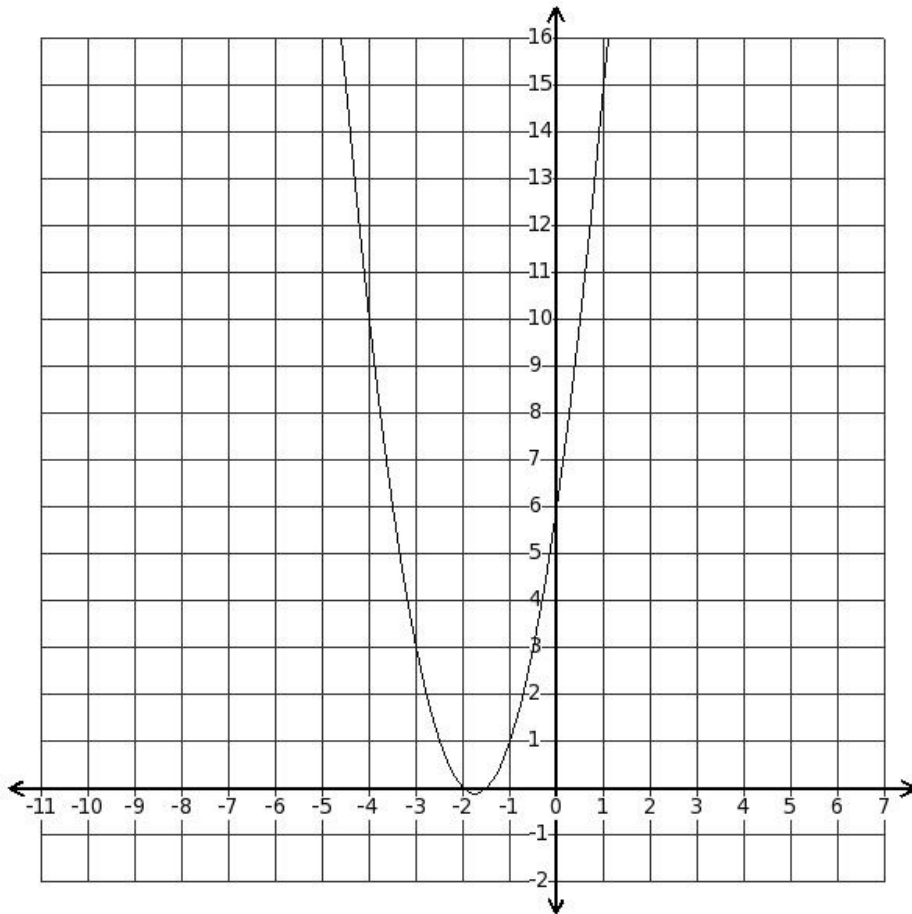
- (i) $y=4x^2$ (ii) $y=3x^2$ (iii) $y=0$ (iv) $y=2x^2$ (v) $y=x^2$

33. Which of the following equations represents the given graph ?



- (i) $y = (-7x^2)$ (ii) $y = (-5x^2)$ (iii) $y = (-4x^2)$ (iv) $y = (-9x^2)$ (v) $y = (-6x^2)$

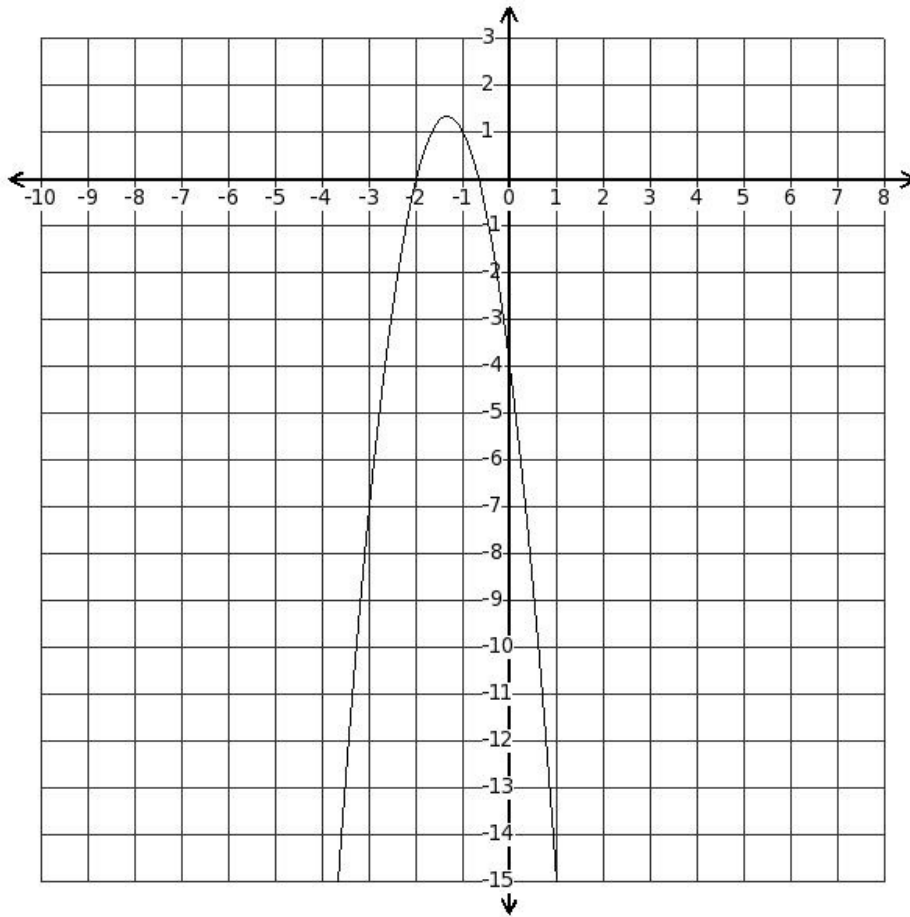
34. Which of the following equations represents the given graph ?



(i) $y=(x^2+7x+6)$ (ii) $y=(3x^2+7x+6)$ (iii) $y=(2x^2+7x+6)$ (iv) $y=(2x^2+4x+6)$

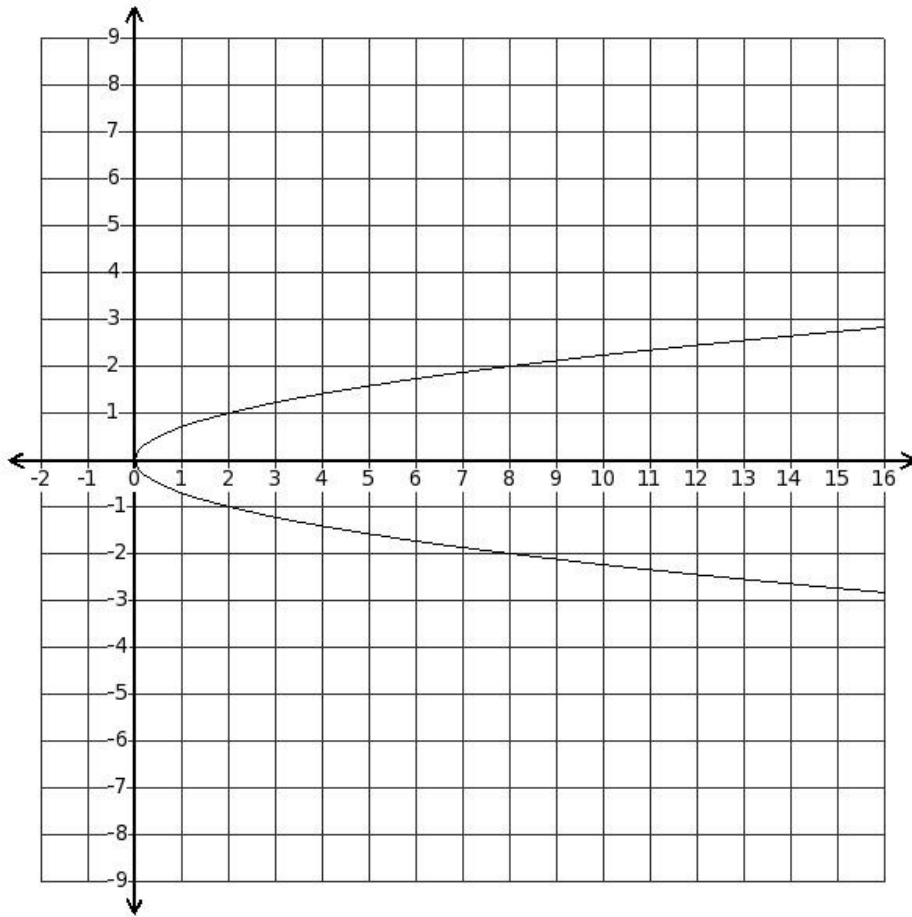
(v) $y=(2x^2+9x+6)$

35. Which of the following equations represents the given graph ?



- (i) $y = (-3x^2 - 8x - 4)$ (ii) $y = (-2x^2 - 8x - 4)$ (iii) $y = (-4x^2 - 8x - 4)$ (iv) $y = (-3x^2 - 5x - 4)$
(v) $y = (-3x^2 - 10x - 4)$

36. Which of the following equations represents the given graph ?



- (i) $x=2y^2$ (ii) $x=y^2$ (iii) $x=4y^2$ (iv) $x=(-y^2)$ (v) $x=3y^2$

37. The point $((-3),(-12))$ lies on which of the given parabolae?

- (i) $y=(-x^2)$ (ii) $y=(-x^2+x-1)$ (iii) $y=(-x^2-1)$ (iv) $y=(-x^2+x)$

Assignment Key

1) (ii)	2) (ii)	3) (iv)	4) (iii)	5) (v)	6) (i)
7) (iv)	8) (iii)	9) (i)	10) (iii)	11) (iii)	12) (ii)
13) (v)	14) (v)	15) (ii)	16) (ii)	17) (iii)	18) (i)
19) (iv)	20) (v)	21) (i)	22) (ii)	23) (iv)	24) (iv)
25) (v)	26) (v)	27) (iii)	28) (i)	29) (i)	30) (ii)
31) (v)	32) (iv)	33) (v)	34) (iii)	35) (i)	36) (i)
37) (iv)					