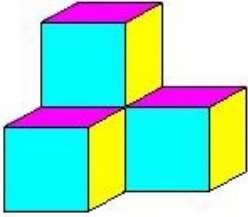


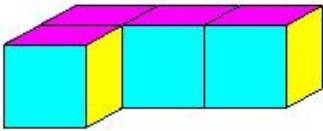


1. Find the volume of the given object if each individual cube is 1 cu.cm



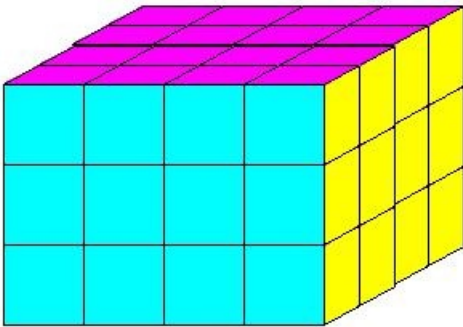
(i) 4 cu.cm (ii) 3 cu.cm (iii) 6 cu.cm (iv) 2 cu.cm (v) 5 cu.cm

2. Find the volume of the given object if each individual cube is 1 cu.cm



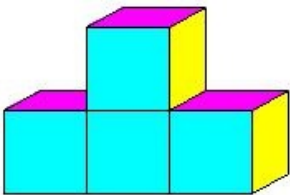
(i) 3 cu.cm (ii) 2 cu.cm (iii) 6 cu.cm (iv) 5 cu.cm (v) 4 cu.cm

3. Find the volume of the given object if each individual cube is 1 cu.cm



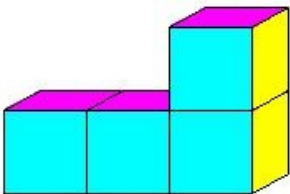
(i) 47 cu.cm (ii) 50 cu.cm (iii) 46 cu.cm (iv) 48 cu.cm (v) 49 cu.cm

4. Find the volume of the given object if each individual cube is 1 cu.cm



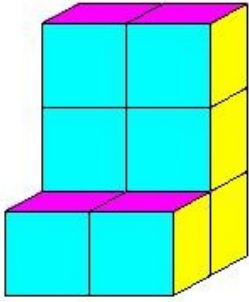
(i) 5 cu.cm (ii) 2 cu.cm (iii) 6 cu.cm (iv) 4 cu.cm (v) 3 cu.cm

5. Find the volume of the given object if each individual cube is 1 cu.cm



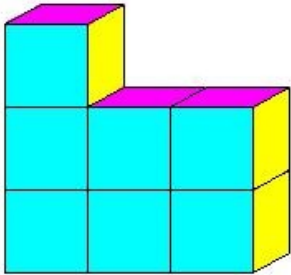
(i) 6 cu.cm (ii) 4 cu.cm (iii) 3 cu.cm (iv) 2 cu.cm (v) 5 cu.cm

6. Find the volume of the given object if each individual cube is 1 cu.cm



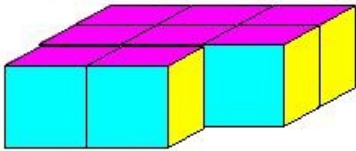
(i) 7 cu.cm (ii) 8 cu.cm (iii) 10 cu.cm (iv) 9 cu.cm (v) 6 cu.cm

7. Find the volume of the given object if each individual cube is 1 cu.cm



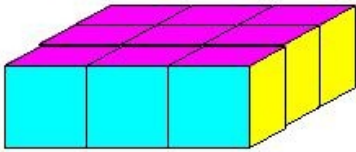
(i) 6 cu.cm (ii) 8 cu.cm (iii) 7 cu.cm (iv) 9 cu.cm (v) 5 cu.cm

8. Find the volume of the given object if each individual cube is 1 cu.cm



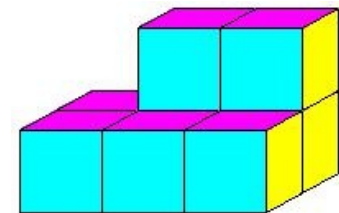
(i) 9 cu.cm (ii) 8 cu.cm (iii) 10 cu.cm (iv) 6 cu.cm (v) 7 cu.cm

9. Find the volume of the given object if each individual cube is 1 cu.cm



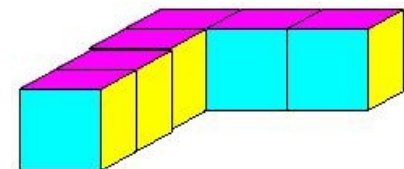
(i) 10 cu.cm (ii) 11 cu.cm (iii) 7 cu.cm (iv) 9 cu.cm (v) 8 cu.cm

10. Find the volume of the given object if each individual cube is 1 cu.cm



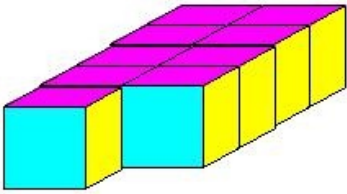
(i) 7 cu.cm (ii) 9 cu.cm (iii) 10 cu.cm (iv) 8 cu.cm (v) 6 cu.cm

11. Find the volume of the given object if each individual cube is 1 cu.cm



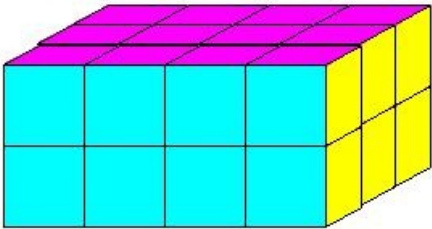
(i) 5 cu.cm (ii) 8 cu.cm (iii) 7 cu.cm (iv) 4 cu.cm (v) 6 cu.cm

12. Find the volume of the given object if each individual cube is 1 cu.cm



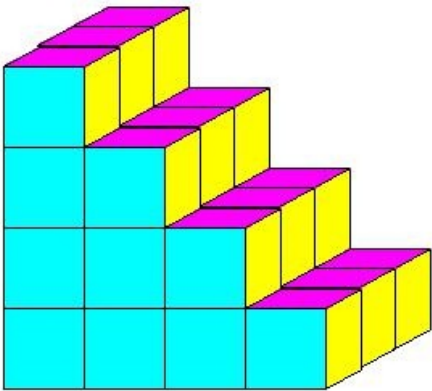
- (i) 9 cu.cm (ii) 10 cu.cm (iii) 7 cu.cm (iv) 11 cu.cm (v) 8 cu.cm

13. Find the volume of the given object if each individual cube is 1 cu.cm



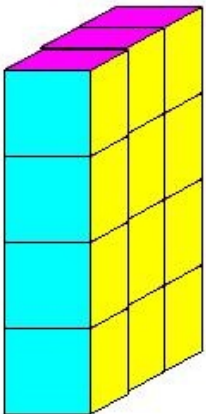
- (i) 22 cu.cm (ii) 24 cu.cm (iii) 23 cu.cm (iv) 25 cu.cm (v) 26 cu.cm

14. Find the volume of the given object if each individual cube is 1 cu.cm



- (i) 29 cu.cm (ii) 28 cu.cm (iii) 31 cu.cm (iv) 30 cu.cm (v) 32 cu.cm

15. Find the volume of the given object if each individual cube is 1 cu.cm



- (i) 12 cu.cm (ii) 14 cu.cm (iii) 11 cu.cm (iv) 13 cu.cm (v) 10 cu.cm

Assignment Key

1) (i)	2) (v)	3) (iv)	4) (iv)	5) (ii)	6) (ii)
7) (iii)	8) (ii)	9) (iv)	10) (iv)	11) (v)	12) (i)
13) (ii)	14) (iv)	15) (i)			