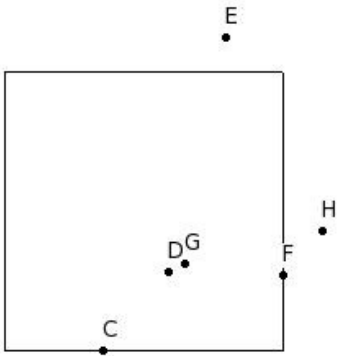


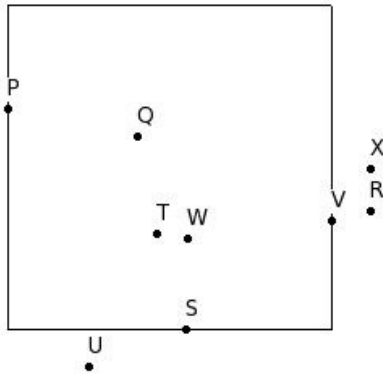


1. Identify the points that are on the square



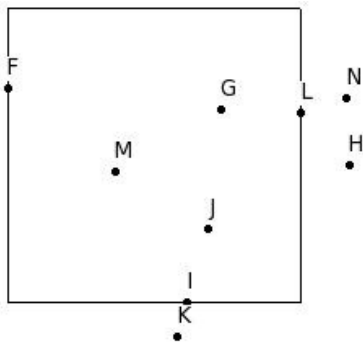
- (i) {E,H} (ii) {D,G} (iii) {C,F} (iv) {C,D} (v) {C,H}

2. Identify the points that are inside the square



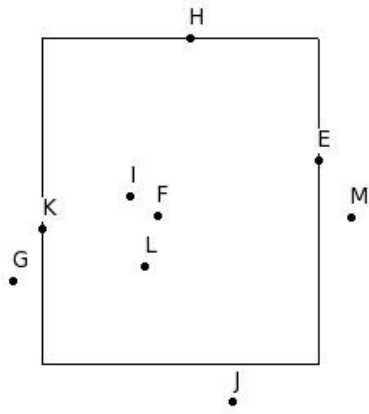
- (i) {R,U,X} (ii) {W,R,Q} (iii) {P,S,V} (iv) {Q,T,W} (v) {P,W,T}

3. Identify the points that are outside the square



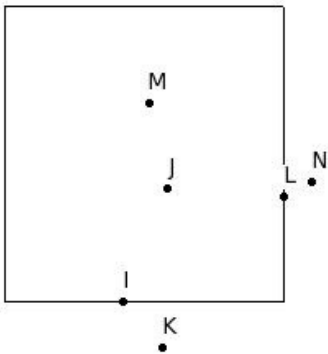
- (i) {I,K,N} (ii) {H,K,N} (iii) {F,I,L} (iv) {K,H,G} (v) {G,J,M}

4. Identify the points that are on the rectangle



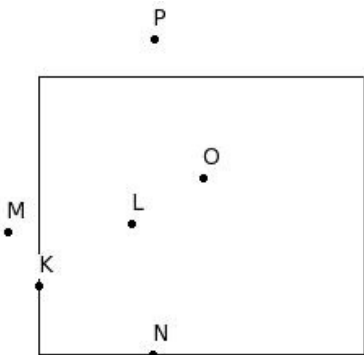
- (i) {F,I,L} (ii) {E,H,K} (iii) {E,H,M} (iv) {G,J,M} (v) {L,E,H}

5. Identify the points that are inside the rectangle



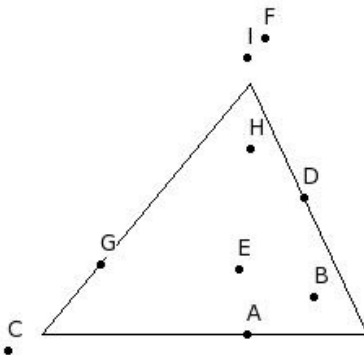
- (i) {J,L} (ii) {I,L} (iii) {J,M} (iv) {K,N} (v) {J,K}

6. Identify the points that are outside the rectangle



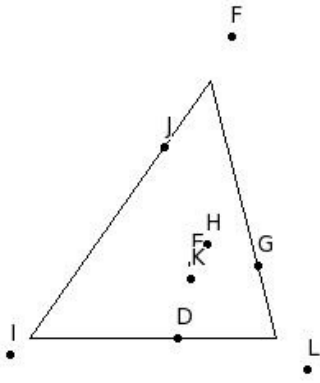
- (i) {L,O} (ii) {K,N} (iii) {L,M} (iv) {M,P} (v) {N,P}

7. Identify the points that are on the triangle



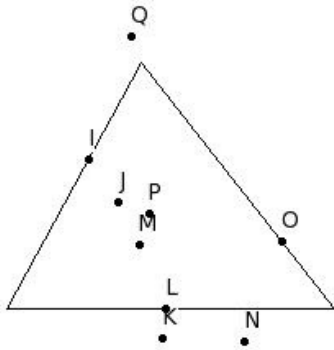
- (i) {C,F,I} (ii) {I,A,D} (iii) {A,D,G} (iv) {H,A,D} (v) {B,E,H}

8. Identify the points that are inside the triangle



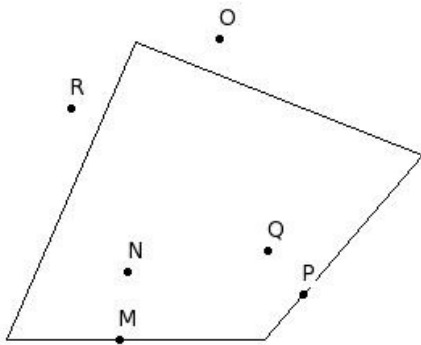
- (i) {F,I,L} (ii) {E,H,K} (iii) {J,H,K} (iv) {D,G,J} (v) {E,H,L}

9. Identify the points that are outside the triangle



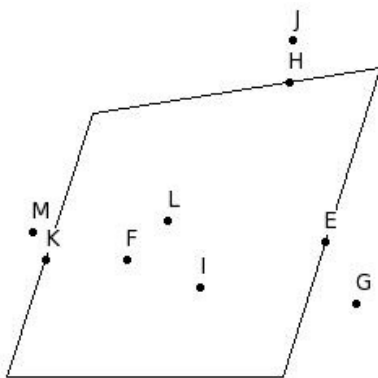
- (i) {K,N,Q} (ii) {J,M,P} (iii) {L,Q,K} (iv) {I,L,O} (v) {N,K,J}

10. Identify the points that are on the quadrilateral



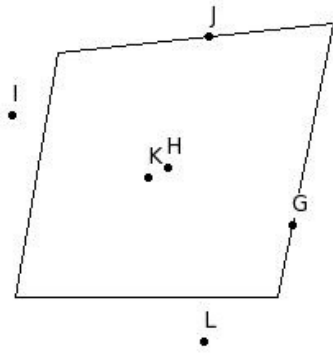
- (i) {N,Q} (ii) {O,R} (iii) {M,R} (iv) {M,Q} (v) {M,P}

11. Identify the points that are inside the quadrilateral



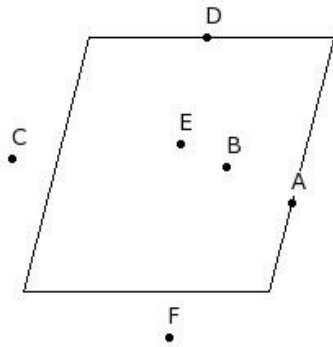
- (i) {E,H,K} (ii) {G,J,M} (iii) {L,M,I} (iv) {K,F,I} (v) {F,I,L}

12. Identify the points that are outside the quadrilateral



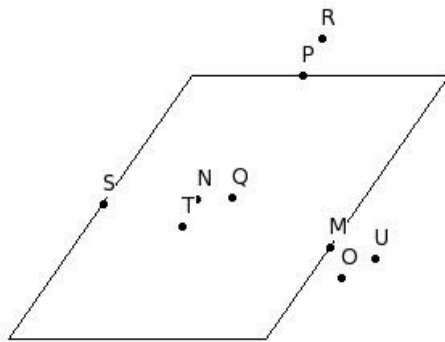
- (i) {H,I} (ii) {H,K} (iii) {I,L} (iv) {G,J} (v) {G,I}

13. Identify the points that are on the parallelogram



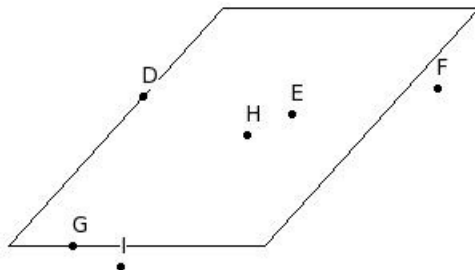
- (i) {A,D} (ii) {C,F} (iii) {B,E} (iv) {C,D} (v) {B,A}

14. Identify the points that are inside the parallelogram



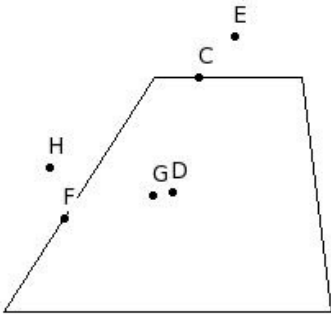
- (i) {T,N,U} (ii) {O,R,U} (iii) {M,P,S} (iv) {T,M,Q} (v) {N,Q,T}

15. Identify the points that are outside the parallelogram



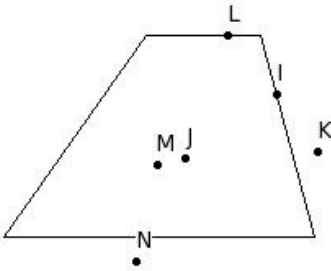
- (i) {D,G} (ii) {I,H} (iii) {F,I} (iv) {D,F} (v) {E,H}

16. Identify the points that are on the trapezium



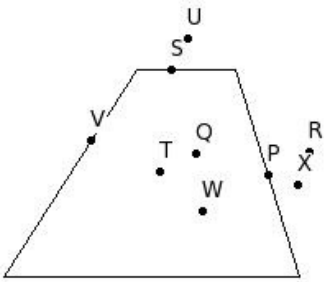
- (i) {E,C} (ii) {C,F} (iii) {G,F} (iv) {D,G} (v) {E,H}

17. Identify the points that are inside the trapezium



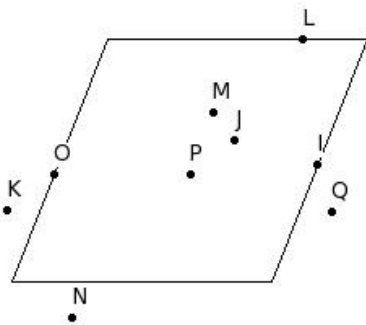
- (i) {M,K} (ii) {K,N} (iii) {L,J} (iv) {J,M} (v) {I,L}

18. Identify the points that are outside the trapezium



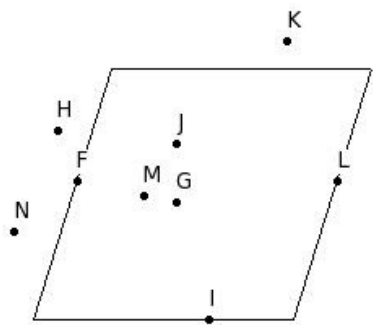
- (i) {R,U,X} (ii) {Q,T,W} (iii) {W,X,R} (iv) {P,S,V} (v) {X,S,U}

19. Identify the points that are on the rhombus



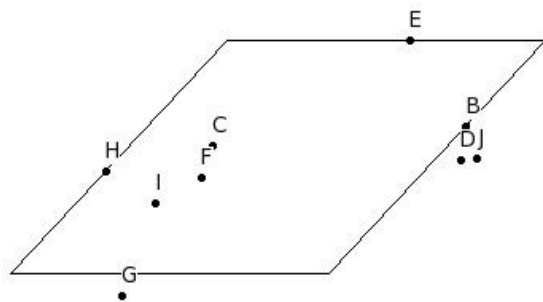
- (i) {O,L,P} (ii) {I,L,O} (iii) {O,L,N} (iv) {J,M,P} (v) {K,N,Q}

20. Identify the points that are inside the rhombus



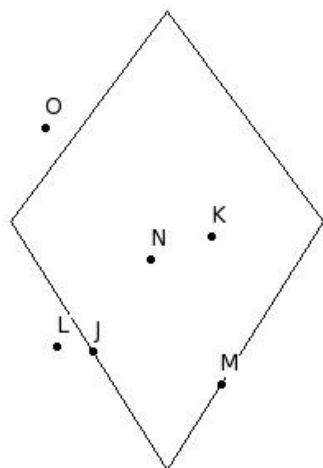
- (i) {L,G,M} (ii) {G,J,M} (iii) {F,I,L} (iv) {M,H,G} (v) {H,K,N}

21. Identify the points that are outside the rhombus



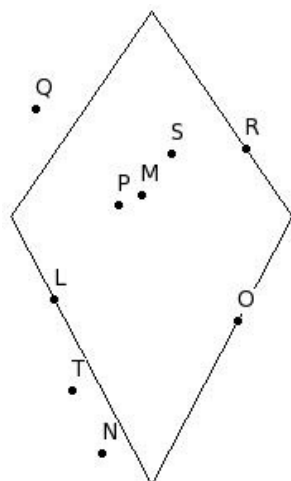
- (i) {D,G,J} (ii) {B,E,H} (iii) {D,G,B} (iv) {C,F,I} (v) {I,G,D}

22. Identify the points that are on the kite



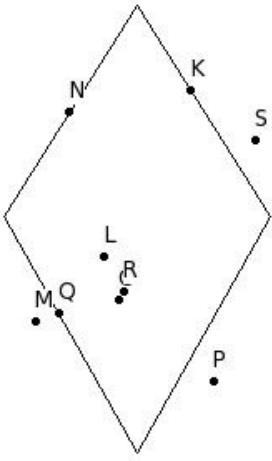
- (i) {J,N} (ii) {J,M} (iii) {L,O} (iv) {K,N} (v) {M,O}

23. Identify the points that are inside the kite



- (i) {N,Q,T} (ii) {L,O,R} (iii) {M,P,S} (iv) {S,P,T} (v) {O,S,M}

24. Identify the points that are outside the kite



- (i) {M,P,S} (ii) {P,M,K} (iii) {L,O,R} (iv) {K,N,Q} (v) {R,M,S}

## Assignment Key

1) (iii)	2) (iv)	3) (ii)	4) (ii)	5) (iii)	6) (iv)
7) (iii)	8) (ii)	9) (i)	10) (v)	11) (v)	12) (iii)
13) (i)	14) (v)	15) (iii)	16) (ii)	17) (iv)	18) (i)
19) (ii)	20) (ii)	21) (i)	22) (ii)	23) (iii)	24) (i)