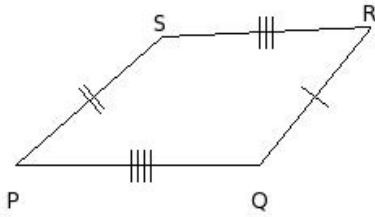


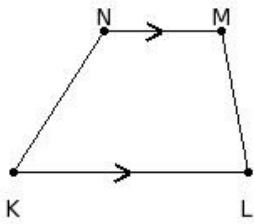


1. Identify the figure below



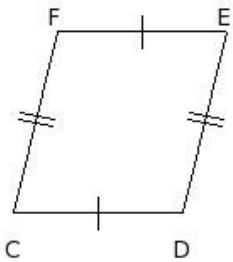
- (i) decagon (ii) triangle (iii) quadrilateral (iv) angle (v) octagon

2. Identify the figure below



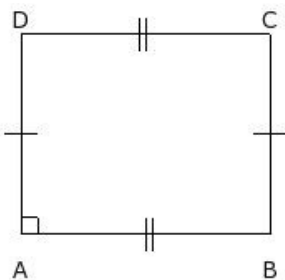
- (i) trapezium (ii) parallelogram (iii) kite (iv) circle (v) triangle

3. Identify the figure below



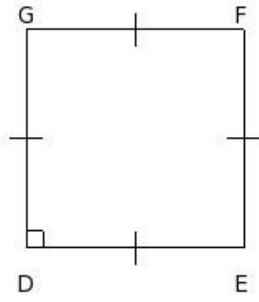
- (i) angle (ii) kite (iii) square (iv) triangle (v) parallelogram

4. Identify the figure below



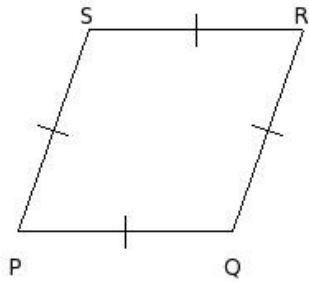
- (i) rectangle (ii) angle (iii) square (iv) trapezium (v) kite

5. Identify the figure below



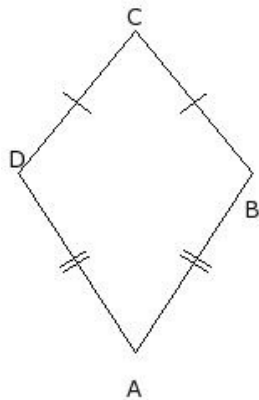
- (i) quadrilateral (ii) circle (iii) rectangle (iv) trapezium (v) square

6. Identify the figure below



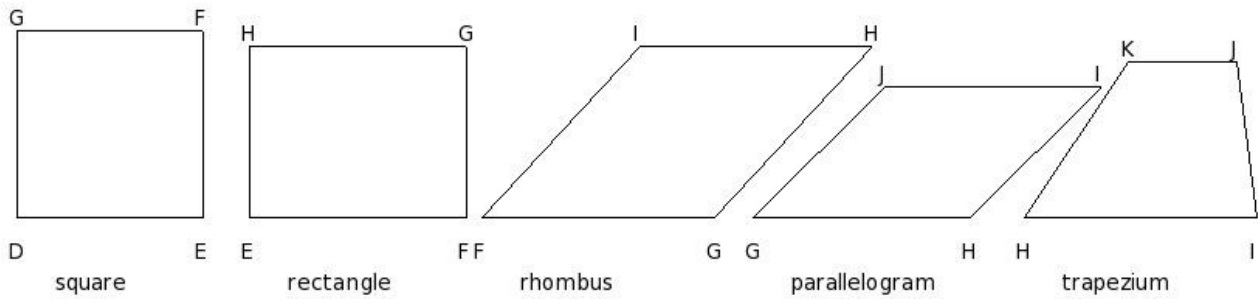
- (i) triangle (ii) kite (iii) trapezium (iv) rhombus (v) angle

7. Identify the figure below



- (i) kite (ii) rhombus (iii) angle (iv) parallelogram (v) circle

8. Which of the following figures is a regular quadrilateral?



- (i) parallelogram (ii) square (iii) rectangle (iv) trapezium (v) rhombus

9. Which of the following is a regular polygon with four sides?

- (i) rectangle (ii) rhombus (iii) trapezium (iv) parallelogram (v) square

## Assignment Key

---

1) (iii)

2) (i)

3) (v)

4) (i)

5) (v)

6) (iv)

7) (i)

8) (ii)

9) (v)