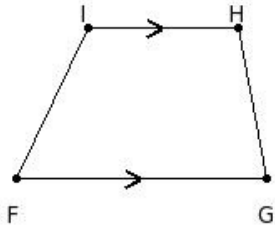


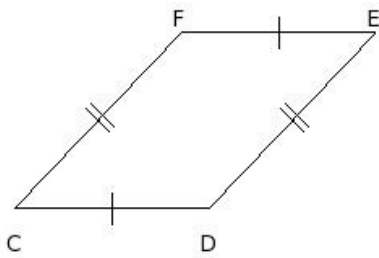


1. Identify the figure below



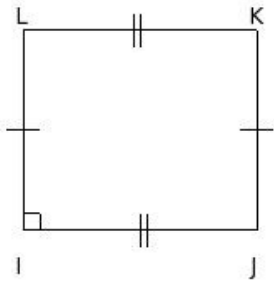
- (i) circle (ii) kite (iii) angle (iv) trapezium (v) square

2. Identify the figure below



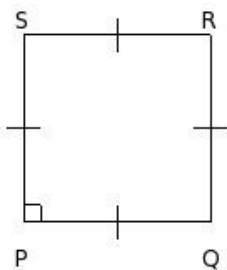
- (i) rectangle (ii) rhombus (iii) parallelogram (iv) kite (v) square

3. Identify the figure below



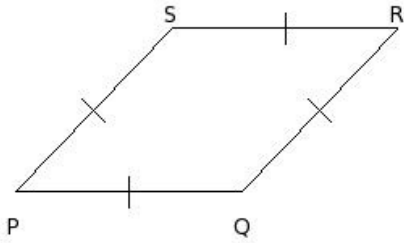
- (i) kite (ii) trapezium (iii) rectangle (iv) angle (v) square

4. Identify the figure below



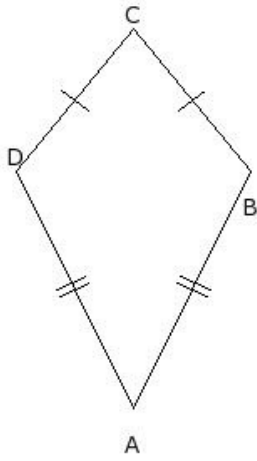
- (i) angle (ii) trapezium (iii) kite (iv) square (v) rectangle

5. Identify the figure below



(i) circle (ii) trapezium (iii) parallelogram (iv) kite (v) rhombus

6. Identify the figure below



(i) trapezium (ii) parallelogram (iii) angle (iv) kite (v) circle

Assignment Key

1) (iv)

2) (iii)

3) (iii)

4) (iv)

5) (v)

6) (iv)

Copyright © Small Systems Computing Pvt. Ltd.