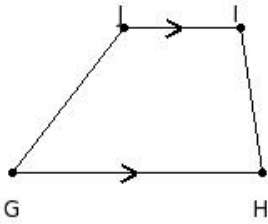


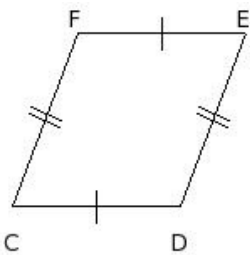


1. Identify the figure below



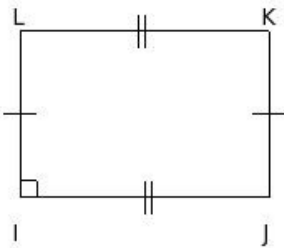
- (i) trapezium (ii) angle (iii) rectangle (iv) rhombus (v) triangle

2. Identify the figure below



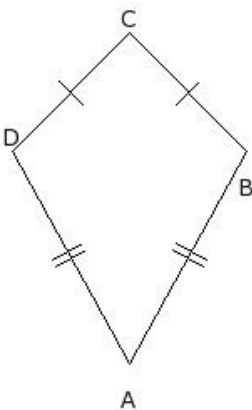
- (i) rhombus (ii) square (iii) rectangle (iv) angle (v) parallelogram

3. Identify the figure below



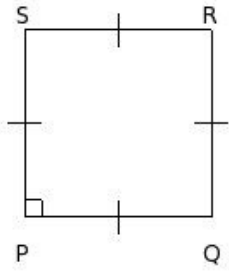
- (i) triangle (ii) parallelogram (iii) kite (iv) rhombus (v) rectangle

4. Identify the figure below



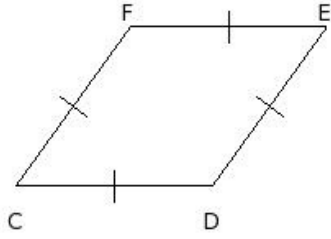
- (i) parallelogram (ii) angle (iii) triangle (iv) kite (v) trapezium

5. Identify the figure below



(i) rhombus (ii) rectangle (iii) square (iv) circle (v) angle

6. Identify the figure below



(i) square (ii) rectangle (iii) parallelogram (iv) rhombus (v) angle

## Assignment Key

---

1) (i)

2) (v)

3) (v)

4) (iv)

5) (iii)

6) (iv)

Copyright © Small Systems Computing Pvt. Ltd.