



1. Which of the figures represent the side view of the given 3-D figure?


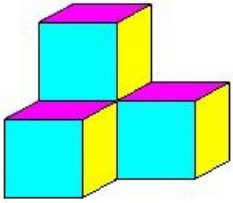


figure 1

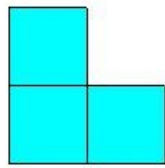


figure 2

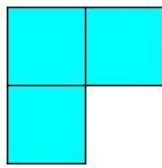


figure 3

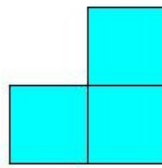


figure 4

(i) figure 4 (ii) figure 1 (iii) figure 2 (iv) figure 3

2. Which of the figures represent the top view of the given 3-D figure?


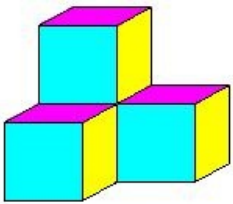


figure 1

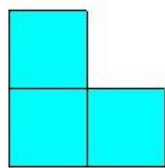


figure 2

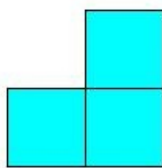


figure 3

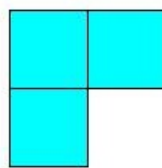


figure 4

(i) figure 2 (ii) figure 1 (iii) figure 3 (iv) figure 4

3. Which of the figures represent the front view of the given 3-D figure?

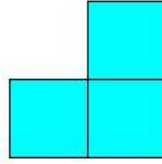
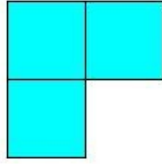


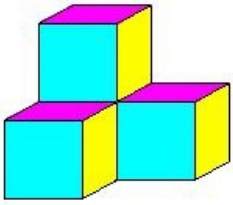


figure 1

figure 2

figure 3

figure 4

(i) figure 2 (ii) figure 1 (iii) figure 4 (iv) figure 3

4. Which of the figures represent the side view of the given 3-D figure?

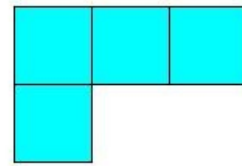
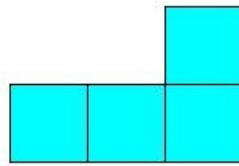


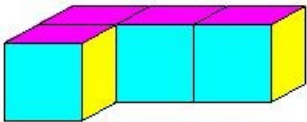


figure 1

figure 2

figure 3

figure 4

(i) figure 2 (ii) figure 4 (iii) figure 3 (iv) figure 1

5. Which of the figures represent the top view of the given 3-D figure?


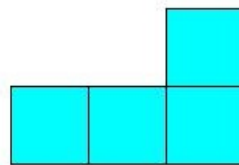
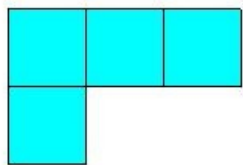

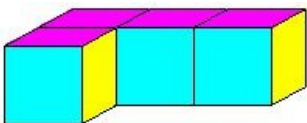


figure 1

figure 2

figure 3

figure 4

(i) figure 3 (ii) figure 4 (iii) figure 2 (iv) figure 1

6. Which of the figures represent the front view of the given 3-D figure?

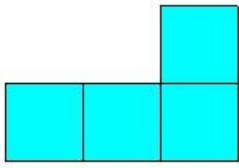
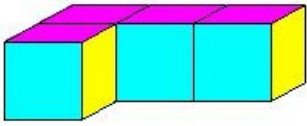


figure 1

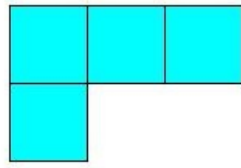


figure 2




figure 3




figure 4

(i) figure 2 (ii) figure 4 (iii) figure 3 (iv) figure 1

7. Which of the figures represent the side view of the given 3-D figure?

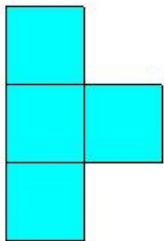
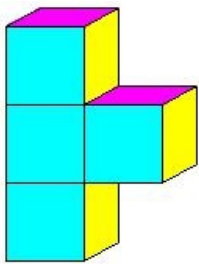


figure 1




figure 2




figure 3




figure 4

(i) figure 4 (ii) figure 1 (iii) figure 3 (iv) figure 2

8. Which of the figures represent the top view of the given 3-D figure?

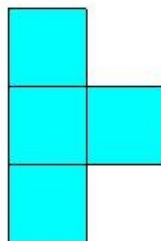



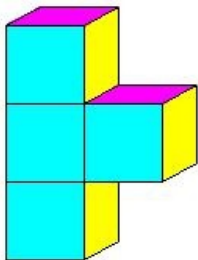


figure 1

figure 2

figure 3

figure 4

(i) figure 1 (ii) figure 4 (iii) figure 3 (iv) figure 2

9. Which of the figures represent the front view of the given 3-D figure?

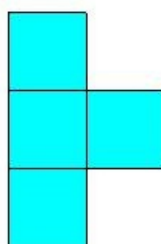



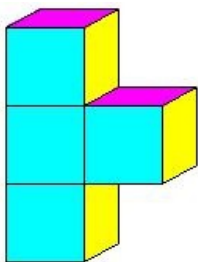


figure 1

figure 2

figure 3

figure 4

(i) figure 3 (ii) figure 4 (iii) figure 1 (iv) figure 2

10. Which of the figures represent the side view of the given 3-D figure?

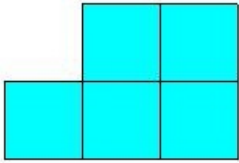
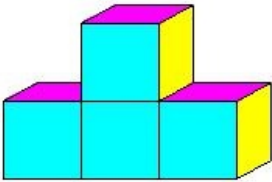


figure 1

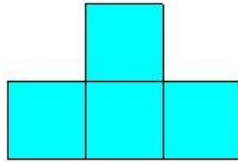


figure 2

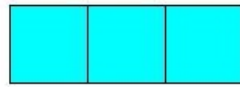


figure 3




figure 4

(i) figure 1 (ii) figure 4 (iii) figure 3 (iv) figure 2

11. Which of the figures represent the top view of the given 3-D figure?


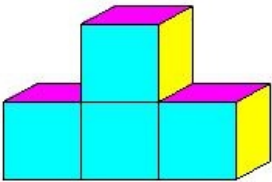


figure 1

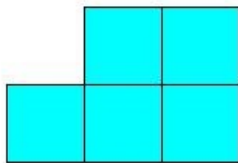


figure 2

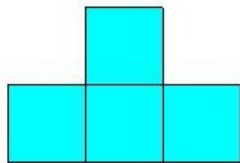


figure 3




figure 4

(i) figure 2 (ii) figure 4 (iii) figure 1 (iv) figure 3

12. Which of the figures represent the front view of the given 3-D figure?

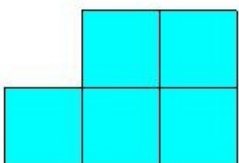
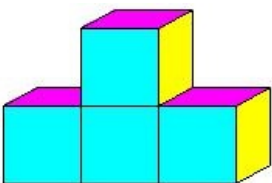


figure 1




figure 2

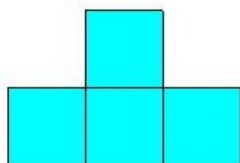


figure 3




figure 4

(i) figure 3 (ii) figure 4 (iii) figure 2 (iv) figure 1

13. Which of the figures represent the side view of the given 3-D figure?


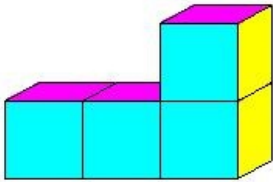


figure 1




figure 2

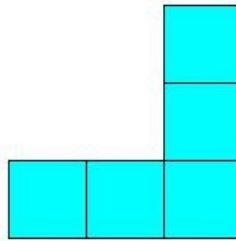


figure 3

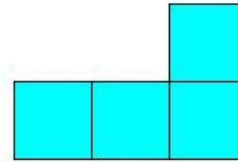


figure 4

- (i) figure 2 (ii) figure 1 (iii) figure 3 (iv) figure 4

14. Which of the figures represent the top view of the given 3-D figure?

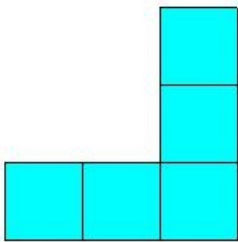
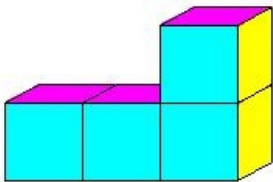


figure 1




figure 2




figure 3

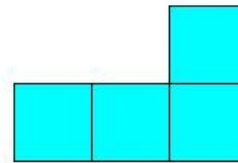


figure 4

- (i) figure 4 (ii) figure 2 (iii) figure 3 (iv) figure 1

15. Which of the figures represent the front view of the given 3-D figure?

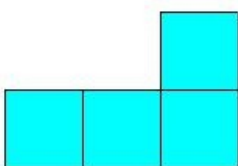
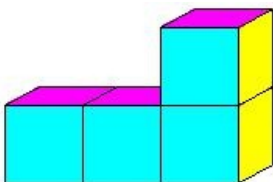


figure 1

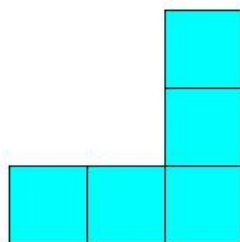


figure 2




figure 3




figure 4

- (i) figure 4 (ii) figure 3 (iii) figure 2 (iv) figure 1

16. Which of the figures represent the side view of the given 3-D figure?

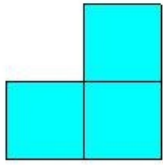
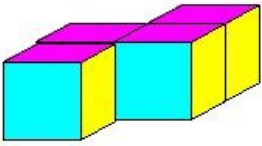


figure 1

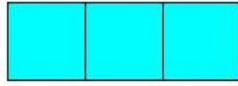


figure 2

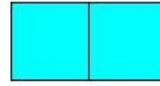


figure 3

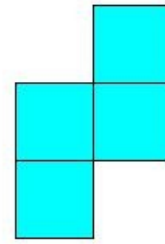


figure 4

(i) figure 2 (ii) figure 1 (iii) figure 4 (iv) figure 3

17. Which of the figures represent the top view of the given 3-D figure?


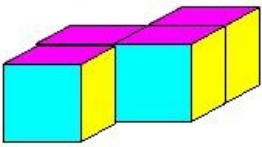


figure 1

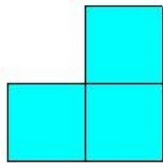


figure 2




figure 3

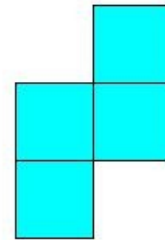


figure 4

(i) figure 3 (ii) figure 2 (iii) figure 1 (iv) figure 4

18. Which of the figures represent the front view of the given 3-D figure?

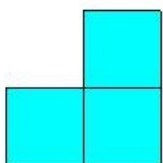
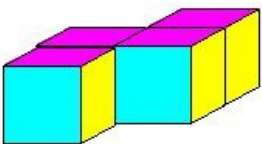


figure 1




figure 2

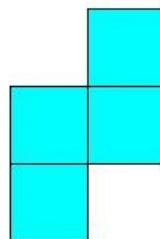


figure 3




figure 4

(i) figure 1 (ii) figure 4 (iii) figure 3 (iv) figure 2

19. Which of the figures represent the side view of the given 3-D figure?

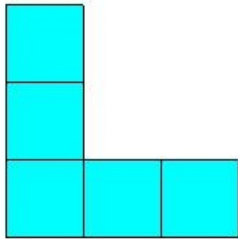
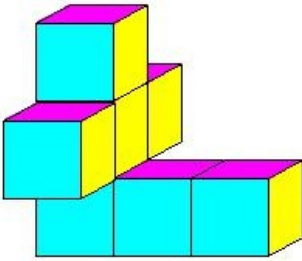


figure 1

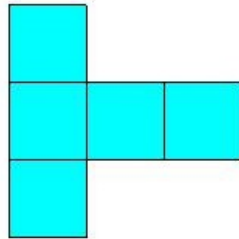


figure 2

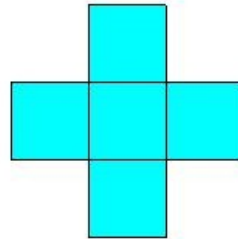


figure 3

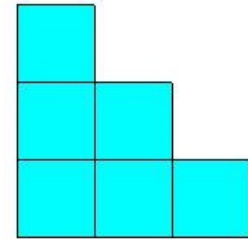


figure 4

(i) figure 3 (ii) figure 1 (iii) figure 4 (iv) figure 2

20. Which of the figures represent the top view of the given 3-D figure?

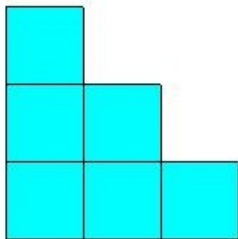
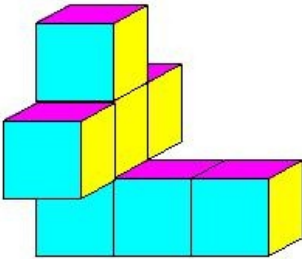


figure 1

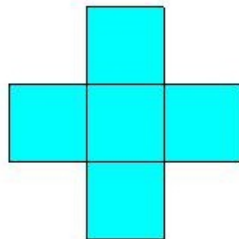


figure 2

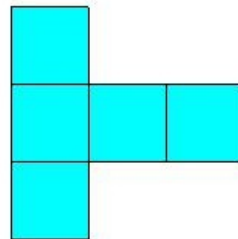


figure 3

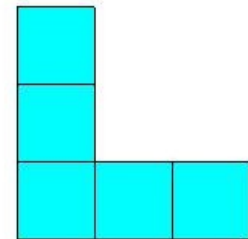


figure 4

(i) figure 3 (ii) figure 1 (iii) figure 4 (iv) figure 2

21. Which of the figures represent the front view of the given 3-D figure?

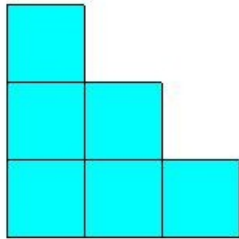
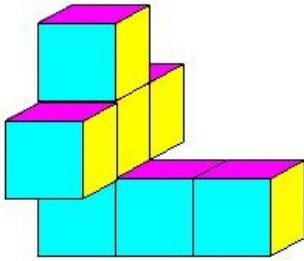


figure 1

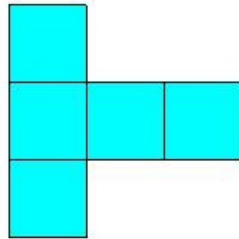


figure 2

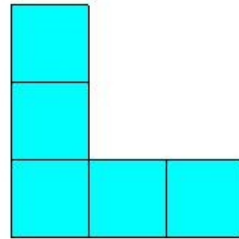


figure 3

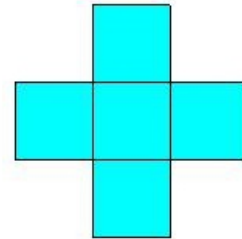


figure 4

(i) figure 1 (ii) figure 4 (iii) figure 3 (iv) figure 2

22. Which of the figures represent the side view of the given 3-D figure?

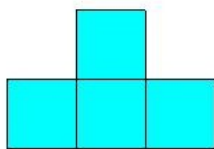
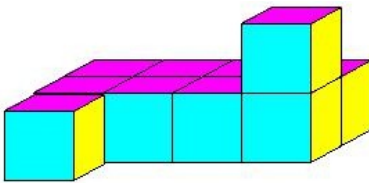


figure 1

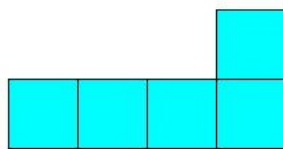


figure 2

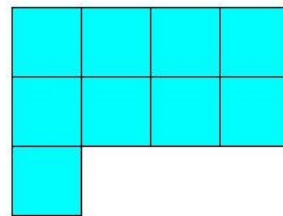


figure 3

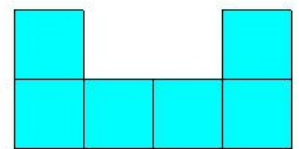


figure 4

(i) figure 3 (ii) figure 2 (iii) figure 4 (iv) figure 1

23. Which of the figures represent the top view of the given 3-D figure?

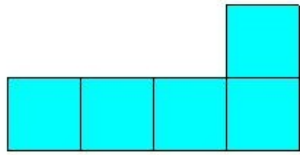
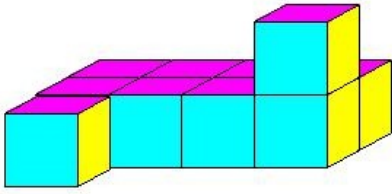


figure 1

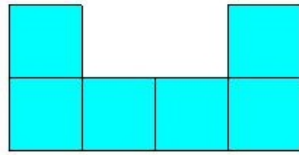


figure 2

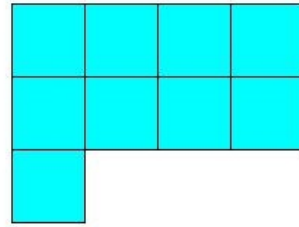


figure 3

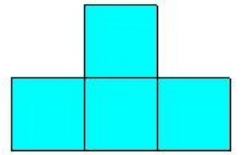


figure 4

(i) figure 1 (ii) figure 3 (iii) figure 2 (iv) figure 4

24. Which of the figures represent the front view of the given 3-D figure?

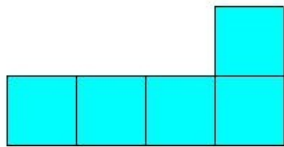
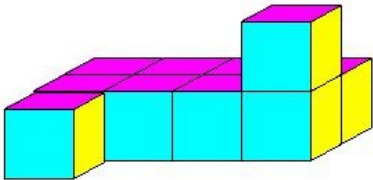


figure 1

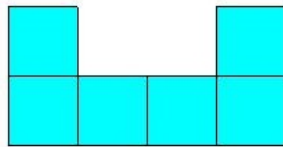


figure 2

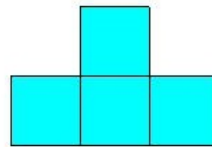


figure 3

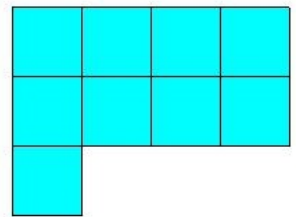


figure 4

(i) figure 1 (ii) figure 2 (iii) figure 4 (iv) figure 3

25. Which of the figures represent the side view of the given 3-D figure?

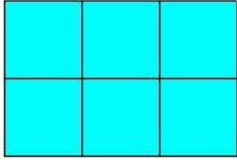
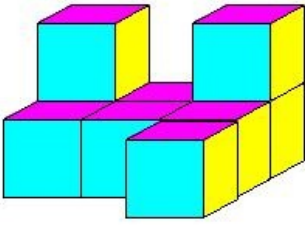


figure 1

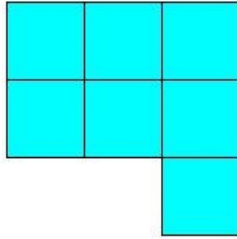


figure 2

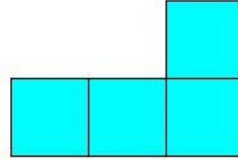


figure 3

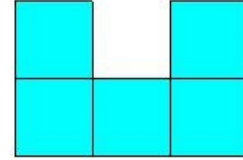


figure 4

(i) figure 4 (ii) figure 1 (iii) figure 2 (iv) figure 3

26. Which of the figures represent the top view of the given 3-D figure?

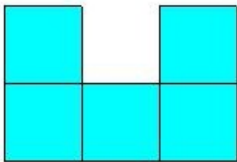
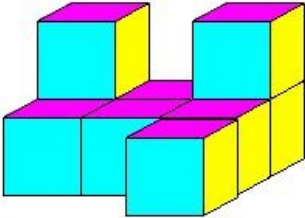


figure 1

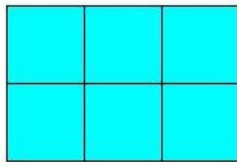


figure 2

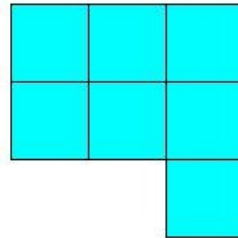


figure 3

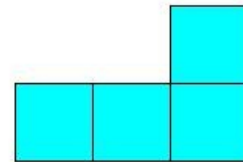


figure 4

(i) figure 1 (ii) figure 4 (iii) figure 2 (iv) figure 3

27. Which of the figures represent the front view of the given 3-D figure?

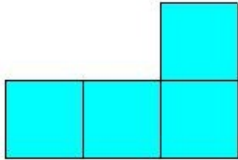
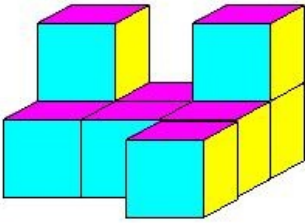


figure 1

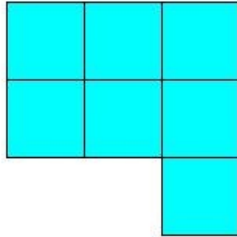


figure 2

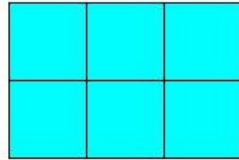


figure 3

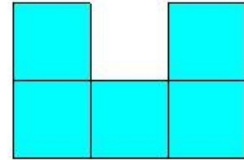


figure 4

(i) figure 2 (ii) figure 4 (iii) figure 3 (iv) figure 1

28. Which of the figures represent the side view of the given 3-D figure?

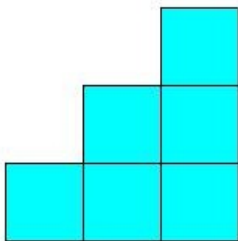
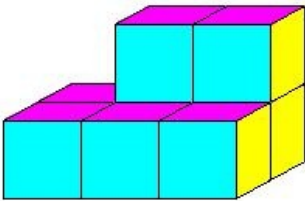


figure 1

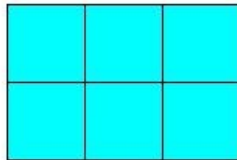


figure 2

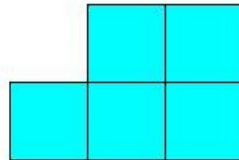


figure 3

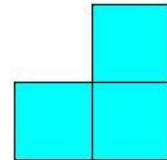


figure 4

(i) figure 2 (ii) figure 4 (iii) figure 3 (iv) figure 1

29. Which of the figures represent the top view of the given 3-D figure?

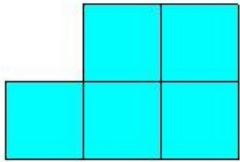
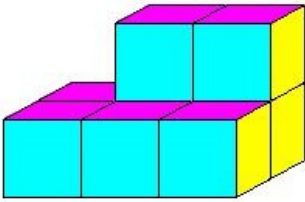


figure 1

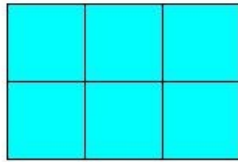


figure 2

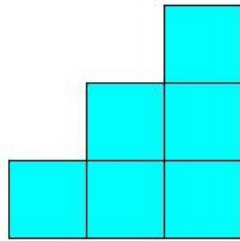


figure 3

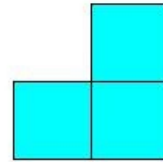


figure 4

(i) figure 1 (ii) figure 4 (iii) figure 2 (iv) figure 3

30. Which of the figures represent the front view of the given 3-D figure?

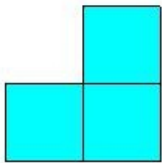
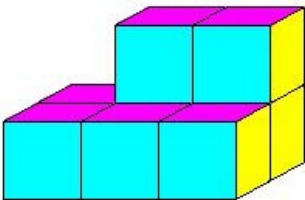


figure 1

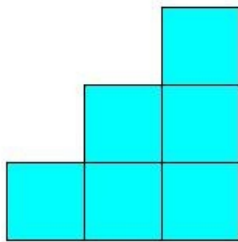


figure 2

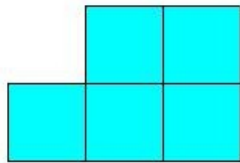


figure 3

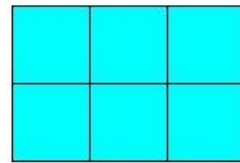


figure 4

(i) figure 1 (ii) figure 3 (iii) figure 2 (iv) figure 4

31. Which of the figures represent the side view of the given 3-D figure?

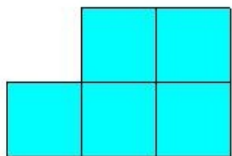
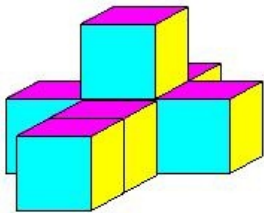


figure 1

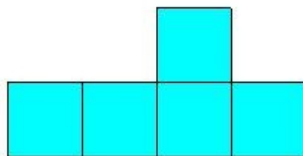


figure 2

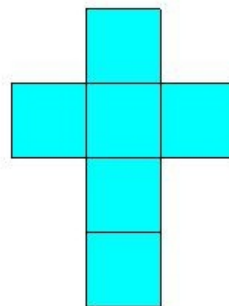


figure 3

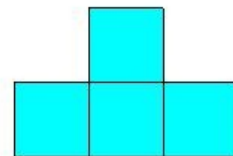


figure 4

(i) figure 2 (ii) figure 4 (iii) figure 1 (iv) figure 3

32. Which of the figures represent the top view of the given 3-D figure?

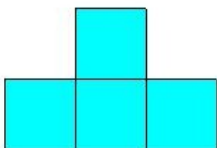
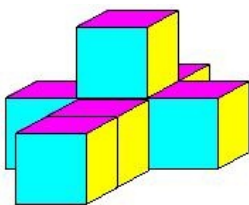


figure 1

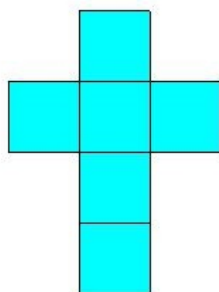


figure 2

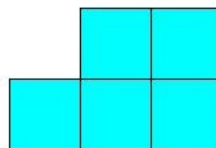


figure 3

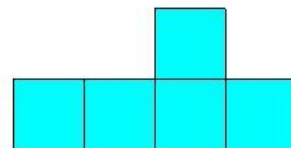


figure 4

(i) figure 2 (ii) figure 1 (iii) figure 3 (iv) figure 4

33. Which of the figures represent the front view of the given 3-D figure?

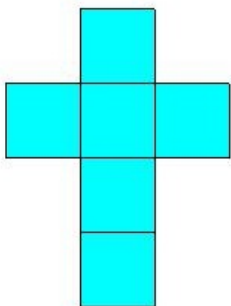
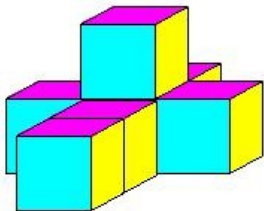


figure 1

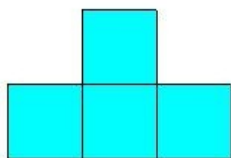


figure 2

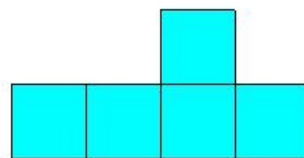


figure 3

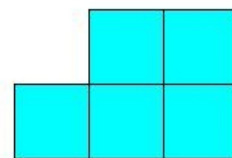


figure 4

- (i) figure 1 (ii) figure 3 (iii) figure 4 (iv) figure 2

34. Which of the figures represent the side view of the given 3-D figure?

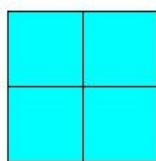
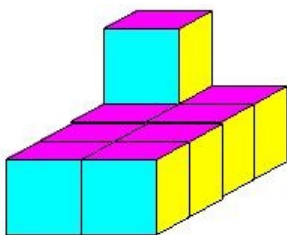


figure 1

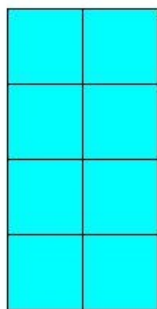


figure 2




figure 3

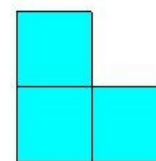


figure 4

- (i) figure 3 (ii) figure 2 (iii) figure 1 (iv) figure 4

35. Which of the figures represent the top view of the given 3-D figure?

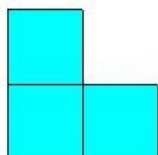
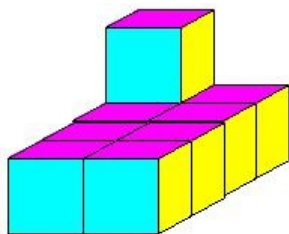


figure 1

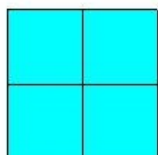


figure 2




figure 3

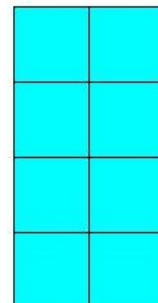


figure 4

(i) figure 4 (ii) figure 1 (iii) figure 3 (iv) figure 2

36. Which of the figures represent the front view of the given 3-D figure?

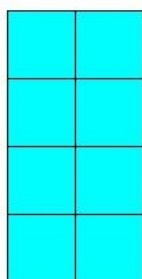
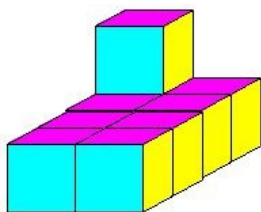


figure 1

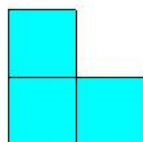


figure 2

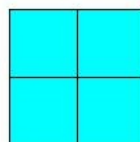


figure 3




figure 4

(i) figure 4 (ii) figure 1 (iii) figure 2 (iv) figure 3

37. Which of the figures represent the side view of the given 3-D figure?

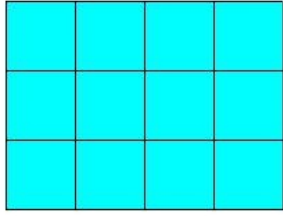
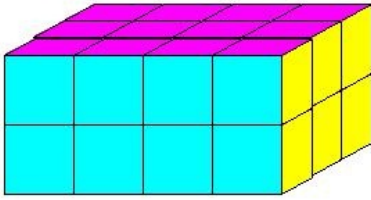


figure 1

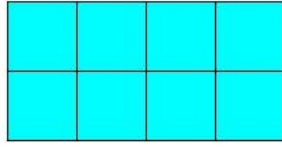


figure 2

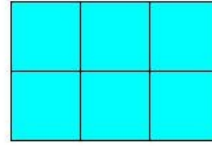


figure 3

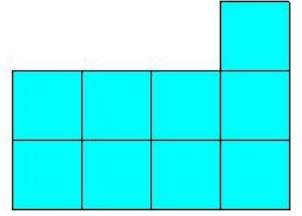


figure 4

- (i) figure 1 (ii) figure 2 (iii) figure 4 (iv) figure 3

38. Which of the figures represent the top view of the given 3-D figure?

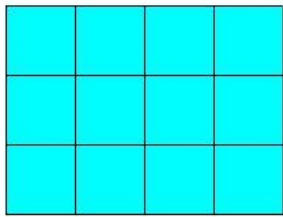
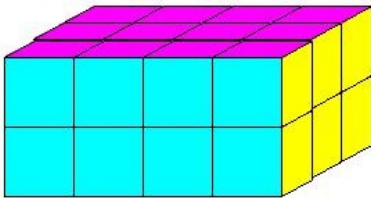


figure 1

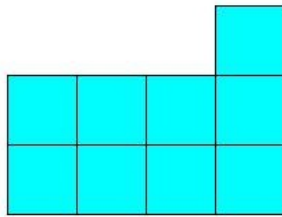


figure 2

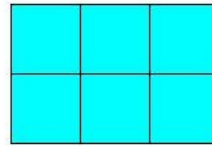


figure 3

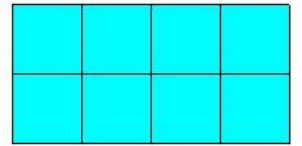


figure 4

- (i) figure 4 (ii) figure 1 (iii) figure 2 (iv) figure 3

39. Which of the figures represent the front view of the given 3-D figure?

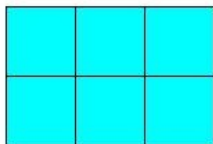
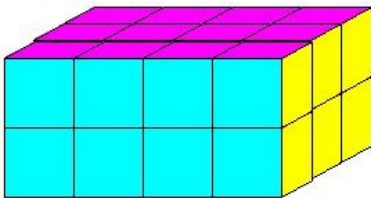


figure 1

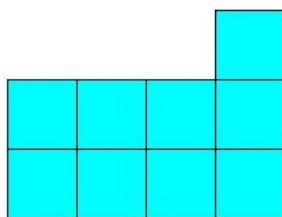


figure 2

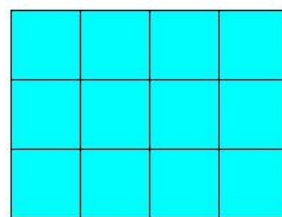


figure 3

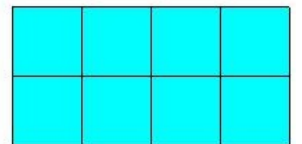


figure 4

- (i) figure 1 (ii) figure 2 (iii) figure 3 (iv) figure 4

40. Which of the figures represent the side view of the given 3-D figure?

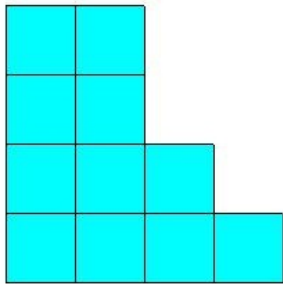
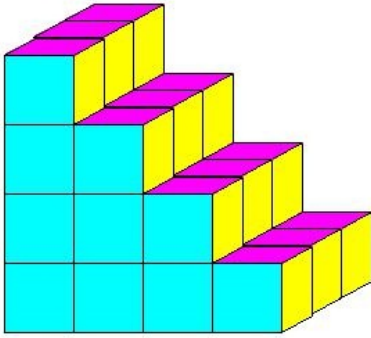


figure 1




figure 2

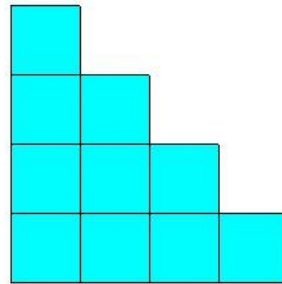


figure 3

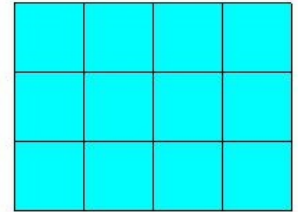


figure 4

- (i) figure 3 (ii) figure 1 (iii) figure 4 (iv) figure 2

41. Which of the figures represent the top view of the given 3-D figure?

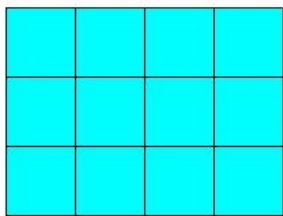
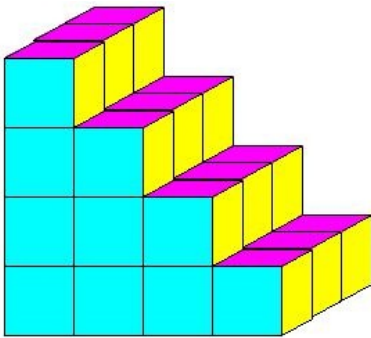


figure 1




figure 2

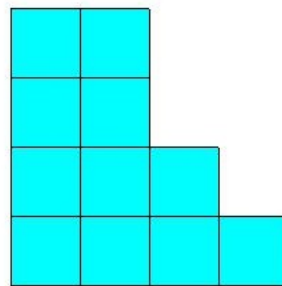


figure 3

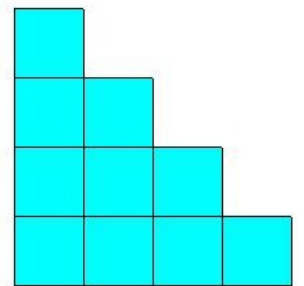


figure 4

- (i) figure 1 (ii) figure 3 (iii) figure 4 (iv) figure 2

42. Which of the figures represent the front view of the given 3-D figure?

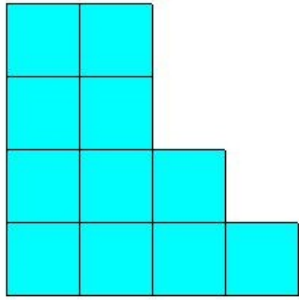
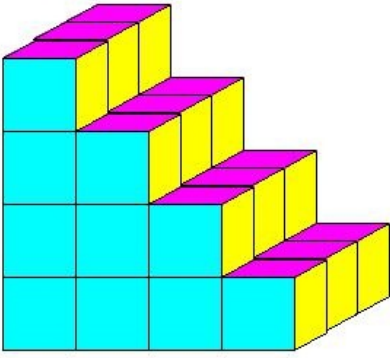


figure 1

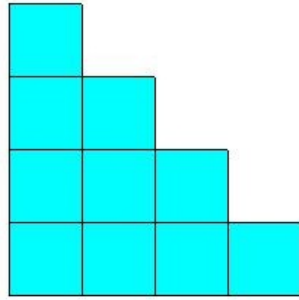


figure 2

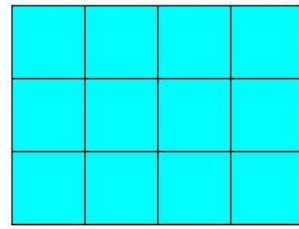


figure 3

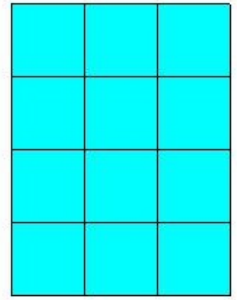


figure 4

(i) figure 3 (ii) figure 1 (iii) figure 2 (iv) figure 4

43. Which of the figures represent the side view of the given 3-D figure?


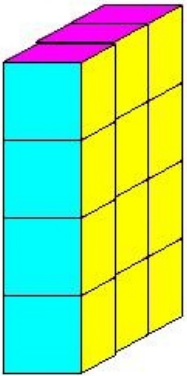


figure 1




figure 2




figure 3



figure 4

(i) figure 4 (ii) figure 3 (iii) figure 1 (iv) figure 2

44. Which of the figures represent the top view of the given 3-D figure?


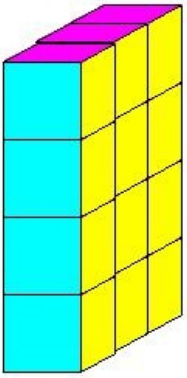


figure 1




figure 2




figure 3

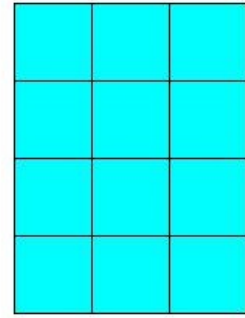


figure 4

(i) figure 2 (ii) figure 1 (iii) figure 3 (iv) figure 4

45. Which of the figures represent the front view of the given 3-D figure?

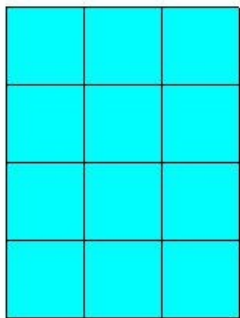
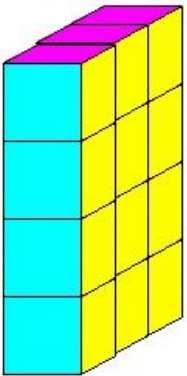


figure 1




figure 2




figure 3



figure 4

(i) figure 2 (ii) figure 1 (iii) figure 3 (iv) figure 4

Assignment Key

1) (i)	2) (iv)	3) (ii)	4) (i)	5) (iii)	6) (ii)
7) (iv)	8) (iii)	9) (ii)	10) (ii)	11) (ii)	12) (i)
13) (ii)	14) (ii)	15) (iv)	16) (i)	17) (iv)	18) (iv)
19) (i)	20) (i)	21) (iii)	22) (iv)	23) (ii)	24) (i)
25) (iv)	26) (iv)	27) (ii)	28) (ii)	29) (iii)	30) (ii)
31) (i)	32) (i)	33) (iv)	34) (i)	35) (i)	36) (iii)
37) (iv)	38) (ii)	39) (iv)	40) (iv)	41) (i)	42) (iii)
43) (ii)	44) (i)	45) (iii)			